

Amplify Desmos Math **CALIFORNIA**

Mathematics I

**Intervention, Extension, and
Investigation Resources**

Contents



Log in to the digital curriculum to review all program Mini-Lessons, Extensions, and Investigations.

Prerequisite Skills and Concepts	3
6.6.11 Evaluating Expressions With Exponents	4
6.8.14 Interpreting Box Plots	8
7.4.01 Calculating Percentages	12
6.6.14 Interpreting Graphs	16
7.6.16 Solving Inequalities	20
8.1.06 Determining Coordinates After a Rotation	24
8.1.09 Justifying Congruent Figures	28
7.2.03 Determining the Constant of Proportionality	32
8.3.05 Interpreting Slope and Intercepts of Linear Relationships	36
8.3.09 Calculating Slope Given Two Points	40
8.4.04 Solving Linear Equations with Parentheses	44
8.4.11 Solving Systems of Linear Equations by Graphing	48
8.5.03 Justifying Whether a Graph Represents a Function	52
8.6.03 Interpreting Points on a Scatter Plot	56
8.6.09 Using Lines of Fit to Make Predictions	60
8.6.10 Calculating Missing Values in Two-Way Tables	64
8.7.03 Multiplying Powers	68
8.8.03 Approximating Square Roots	72
M1.3.15 Writing Equations for Parallel and Perpendicular Lines	76
M1.6.04 Drawing Perpendicular Bisectors	80



Unit 1 Patterns and Sequences

Sub-Unit 1: Sequences	86
Sub-Unit 2: Variables and Relationships	90

Unit 2 Linear Equations and Inequalities

Sub-Unit 1: One-Variable Equations	94
Sub-Unit 2: Multi-Variable Equations	98
Sub-Unit 3: One-Variable and Two-Variable Inequalities	102

Unit 3 Systems of Linear Equations and Inequalities

Sub-Unit 1: Systems of Equations	106
Sub-Unit 2: Systems of Inequalities	102
Sub-Unit 3: Proving Geometric Theorems Algebraically	114

Unit 4 Describing Functions

Sub-Unit 1: Function Notation	116
Sub-Unit 2: Key Features of Functions	119
Sub-Unit 3: Special Types of Functions	123

Unit 5 Exponential Functions

Sub-Unit 1: Comparing Linear and Exponential Functions	127
Sub-Unit 2: Exponential Growth and Decay	131
Sub-Unit 3: Compound Interest and Modeling Data	135

Extensions (continued)

Unit 6 Rigid Transformations and Congruence

Sub-Unit 1: Constructions	139
Sub-Unit 2: Transformations	143
Sub-Unit 3: Congruence	145

Unit 7 Describing Data

Sub-Unit 1: Representing Categorical Data	149
Sub-Unit 2: Summarizing One-Variable Data	153
Sub-Unit 3: Summarizing Two-Variable Data	156



Investigations

Course Investigations 159

Investigation 1: Tuition Costs	160
Investigation 2: Exploring Global Warming	174
Investigation Answer Keys	193



Mini-Lessons

**Prerequisite Skills
and Concepts**

Mini-Lessons

Evaluating Expressions With Exponents

ML 6.11



Modeled Review



Name: Kai

Determine the value of each expression.

1. $2 \cdot 3^2 = 18$ _____

$$2 \cdot (3 \cdot 3)$$

$$2 \cdot (9)$$

$$18$$

I need to evaluate the part of the expression with the exponent first and then multiply.

2. $5 + (4 - 3)^2 = 6$ _____

$$5 + (1)^2$$

$$5 + (1 \cdot 1)$$

$$5 + 1$$

$$6$$

I need to evaluate the grouped part of the expression first, then the exponent part. Then I can add.



Guided Practice



Determine the value of each expression.

1. 2^2

$$2 \cdot \underline{\quad}$$

2. $2 + 3^2$

$$2 + (\underline{\quad} \cdot \underline{\quad})$$

$$\underline{\quad} + \underline{\quad}$$

3. $(6 - 2)^2$

$$(\underline{\quad})^2$$

$$(\underline{\quad})$$

4. $1 + (3 - 2)^2$

$$1 + (\underline{\quad})^2$$

$$\underline{\quad}$$



Guided Practice



5. Determine the value of each expression.

Expression	Value
$3^2 + 6$	
$(4 + 3)^2$	
$3 + (4 + 1)^2$	
$2 \cdot 4^2$	
$(7 - 1)^2 + 2$	
$6 + 7^2$	



Check



Determine the value of each expression.

1. $3 \cdot 5^2$ _____

2. $7 + (5 - 2)^2$ _____

Interpreting Box Plots

ML 8.14

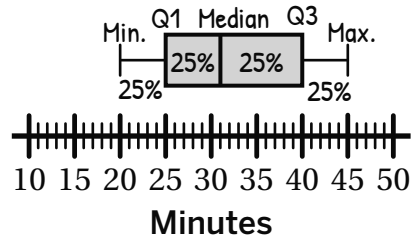


Modeled Review



Name: Santiago

Inola took the bus to school most days in January. She wrote down how many minutes her journey took each day and made this box plot.



1. Determine the median, IQR, and range for this data.

median: 30

IQR: 15

range: 25

$$40 - 25 = 15$$

$$45 - 20 = 25$$

2. What percent of Inola's journey to school took 40 minutes or less?

A. 25%

B. 50%

C. 75%

D. 100%

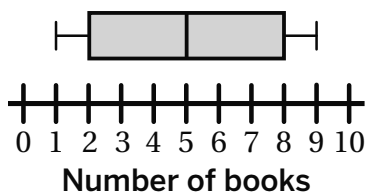


Guided Practice



For Problems 1–2, refer to the box plots to identify the statistics of the data set.

1. Mia measured the number of books she read each day for a week in June.



Min.	Q1	Median	Q3	Max.
1	2			

What percent of the data was more than 5 books?

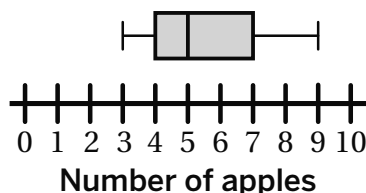
A. 25%

B. 50%

C. 75%

D. 100%

2. Zoe tracked the number of apples she ate each day for a week in January.



Min.	Q1	Median	Q3	Max.

What percent of the data was between 4 and 5 apples?

A. 25%

B. 50%

C. 75%

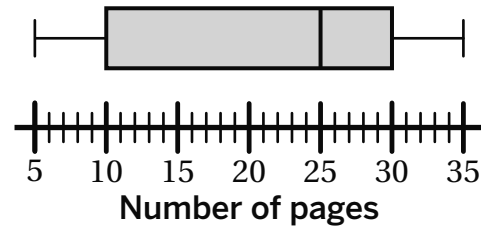
D. 100%



Guided Practice



Eliza tracked the number of pages she read each day for a week. She wrote down the amounts and created this box plot.



3. Determine the median, IQR, and range for this data.

median: _____

IQR: _____

range: _____

4. On what percent of days did Eliza read less than 25 pages?

A. 25%

B. 50%

C. 75%

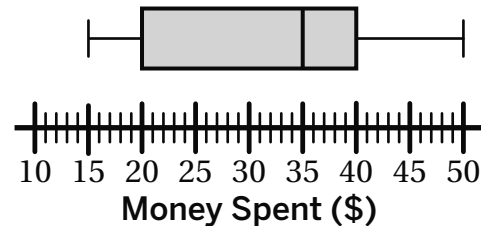
D. 100%



Check



Evan tracked the amount of money he spent on clothes in January. He wrote down the amounts and created this box plot.



1. Determine the median, IQR, and range for this data.

median: _____

IQR: _____

range: _____

2. What percent of Evan's clothes cost at least \$15?

A. 25%

B. 50%

C. 75%

D. 100%

Calculating Percentages

ML 4.01



Modeled Review



Name: Dylan


What percentage of the larger grid is white? Explain your thinking.

I counted 25 squares. Each square has a value of 4% because 100 divided by 25 is 4. There are 10 white squares. I can multiply 4 by 10 to get 40%.

$$\frac{100}{25} = 4\%$$

$$4 \cdot 10 = 40$$

$$40\%$$



Guided Practice



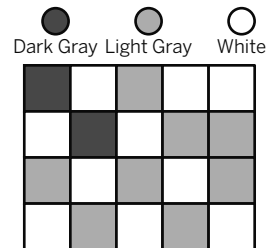
1. What percentage of the grid is light gray or white? Show your thinking.

Light Gray:

$$\frac{100}{20} = \underline{\hspace{2cm}}$$

White:

Color	Percentage
Dark Gray	10%
Light Gray	
White	






Guided Practice




Determine the percentages of the grids that are shaded each color.


2. What percentage of the grid is dark gray? Show your thinking.



3. What percentage of the grid is white? Show your thinking.



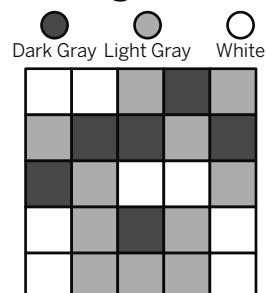
4. What percentage of the grid is light gray? Show your thinking.



Check



What percentage of the grid is white? Show your thinking.



Interpreting Graphs

ML 6.14

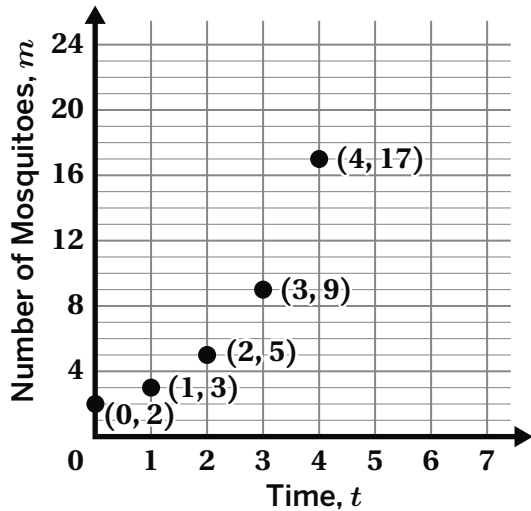


Modeled Review



Name: Shawn

The graph represents the relationship between time, t , and the number of mosquitoes, m . Complete the table so it reflects the values in the graph.



t	m
0	2
1	3
2	5
3	9
4	17

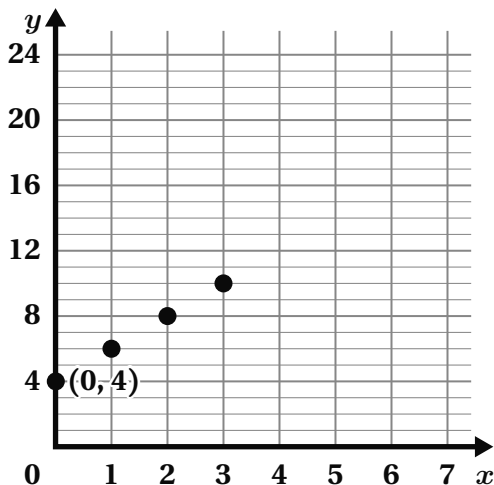
Time is the independent variable, so it represents the x-values. The number of mosquitos is the dependent variable, so it represents the y-values.



Guided Practice



- The graph represents the relationship between the independent variable, x , and the dependent variable, y . Complete the table so it reflects the values in the graph.



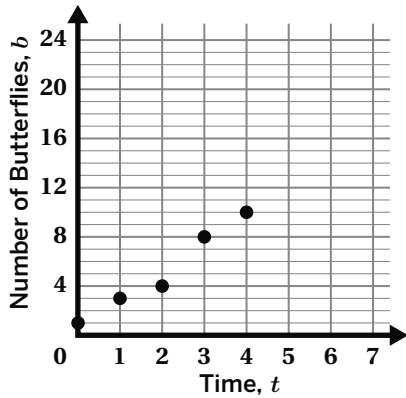
x	y
0	4



Guided Practice

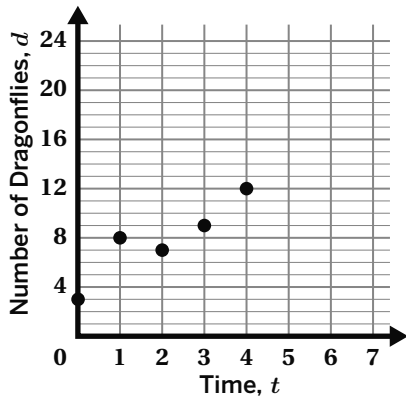


2. This graph represents the relationship between time, t , and the number of butterflies, b . Complete the table so it reflects the values in the graph.



t	b

3. This graph represents the relationship between time, t , and the number of dragonflies, d . Complete the table so it reflects the values in the graph.



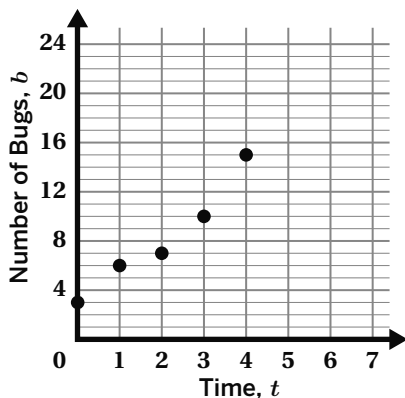
t	d



Check



This graph represents the relationship between time, t , and the number of bugs, b . Complete the table so it reflects the values in the graph.



t	b

Solving Inequalities

ML 6.16



Modeled Review



Name: Priya

Solve and graph the solution to $-2x + 9 < -3$.

$x > 6$ 	$-2x + 9 = -3$ $-9 \quad -9$ $-2x = -12$ $-2 \quad -2$ $x = 6$	$x < 6$ $-2(0) + 9 < -3$ $0 + 9 < -3$ $9 < -3$ False	$x > 6$ $-2(9) + 9 < -3$ $-18 + 9 < -3$ $-9 < -3$ True
-------------	--	---	---



Guided Practice



- Graph the solution to the inequality $3x \geq 9$ by finding the boundary point and testing values on both sides of the boundary point.

Moves	Work		
Move 1: Find the boundary point.	$\frac{3x}{3} = \frac{9}{3}$ $x = \underline{\quad}$		
Move 2: Test the values on both sides of the point and determine whether the statement is true or false.	<table border="0" style="width: 100%;"> <tr> <td style="text-align: center; width: 50%;"> Less than or equal to $3(\underline{\quad}) \geq 9$ $\underline{\quad} \geq 9$ <hr/> </td> <td style="text-align: center; width: 50%;"> Greater than or equal to $3(\underline{\quad}) \geq 9$ $\underline{\quad} \geq 9$ <hr/> </td> </tr> </table>	Less than or equal to $3(\underline{\quad}) \geq 9$ $\underline{\quad} \geq 9$ <hr/>	Greater than or equal to $3(\underline{\quad}) \geq 9$ $\underline{\quad} \geq 9$ <hr/>
Less than or equal to $3(\underline{\quad}) \geq 9$ $\underline{\quad} \geq 9$ <hr/>	Greater than or equal to $3(\underline{\quad}) \geq 9$ $\underline{\quad} \geq 9$ <hr/>		
Move 3: Graph the solution.	$x \geq 3$ 		

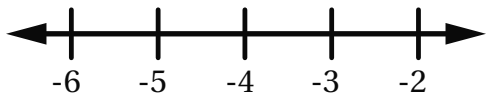


Guided Practice

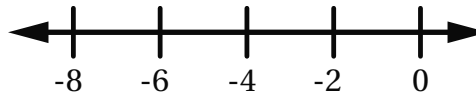


Solve and graph the solution to each of the inequalities.

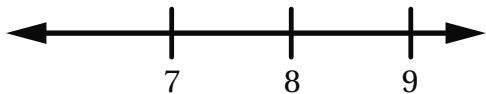
2. $2x + 7 \leq -1$ _____



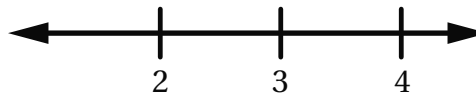
3. $-3x - 3 < 15$ _____



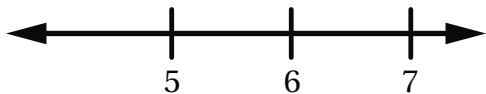
4. $2x - 4 \geq 10$ _____




5. $-6x + 6 > -12$ _____



6. $4x - 5 \geq 15$ _____




7. $-5x + 6 > -24$ _____



Check



Solve and graph the solution to $-4x - 3 < 5$.



Determining Coordinates After a Rotation

ML 1.06



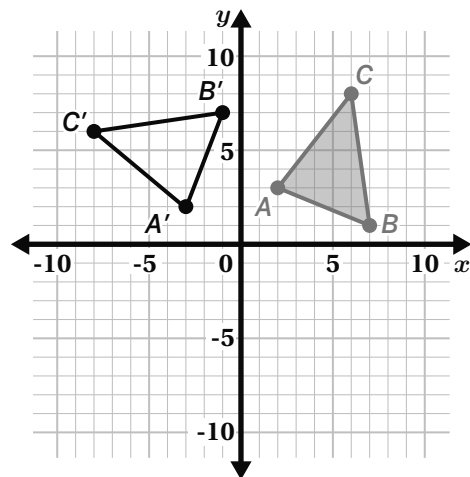
Modeled Review



Name: Priya

Triangle ABC is rotated 90° counterclockwise about the origin. Determine the coordinates of the rotated image.

Pre-image coordinates	Image coordinates
$A(2, 3)$	$A'(-3, 2)$
$B(7, 1)$	$B'(-1, 7)$
$C(6, 8)$	$C'(-8, 6)$

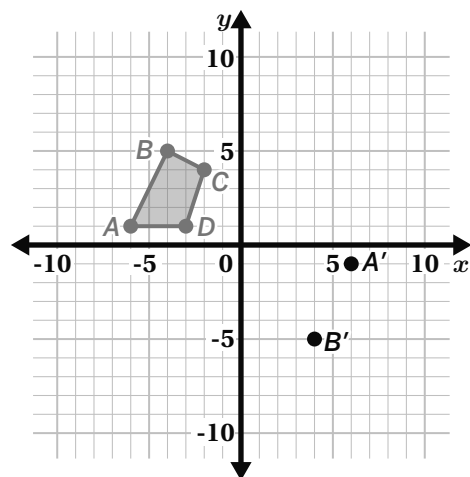


Guided Practice



- Figure $ABCD$ is rotated 180° clockwise about the origin. Determine the coordinates of the rotated image, complete the table, and draw the rotated image.

Pre-image coordinates	Image coordinates
$A(-6, 1)$	$A'(-6, 1)$
$B(-4, 5)$	$B'(4, \underline{\quad})$
$C(-2, 4)$	$C'(2, \underline{\quad})$
$D(-3, 1)$	$D'(\underline{\quad}, \underline{\quad})$



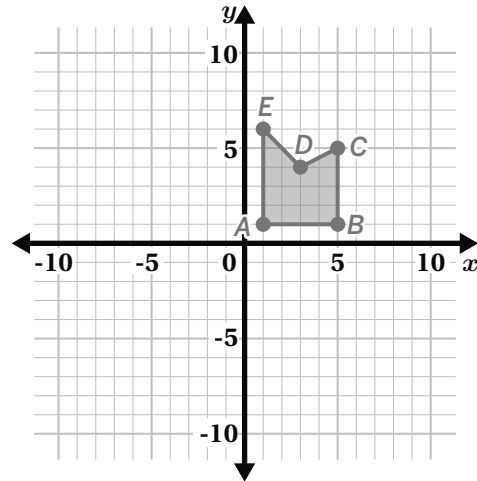


Guided Practice



2. Figure $ABCDE$ is rotated 90° counterclockwise about the origin. Determine the coordinates of the rotated image, complete the table, and draw the rotated image.

Pre-image coordinates	Image coordinates
$A (1, 1)$	$A' (-1, 1)$
$B (5, 1)$	
$C (5, 5)$	
$D (3, 4)$	
$E (1, 6)$	

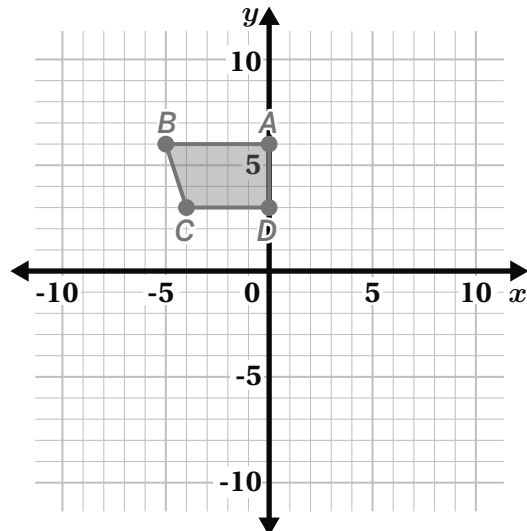


Check



- Trapezoid $ABCD$ is rotated 90° clockwise about the origin. Determine the coordinates of the rotated image, complete the table, and draw the rotated image.

Pre-image coordinates	Image coordinates
$A (0, 6)$	
$B (-5, 6)$	
$C (-4, 3)$	
$D (0, 3)$	



Justifying Congruent Figures

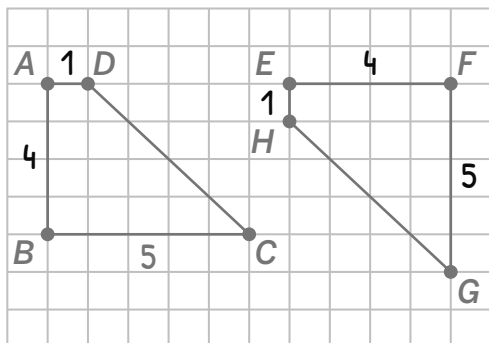
ML 1.09



Modeled Review



Name: Lola



Determine whether Figure $ABCD$ is congruent to figure $EFGH$. Explain your thinking.

Yes, $ABCD$ is congruent to $EFGH$. It can be translated 5 units right and 1 unit down, then reflected across GH . The corresponding side lengths and angle measures are equal.



Guided Practice



For each pair of figures, determine whether they are congruent. Explain your thinking.

1.

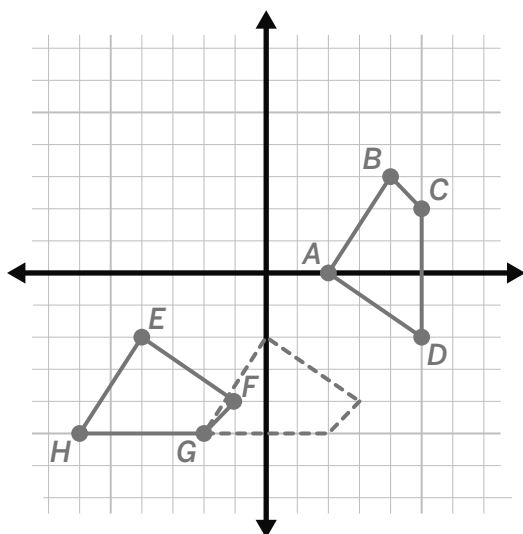


Figure $ABCD$ is _____ and _____ onto Figure $EFGH$. The corresponding side lengths and angle measures are _____.

2.

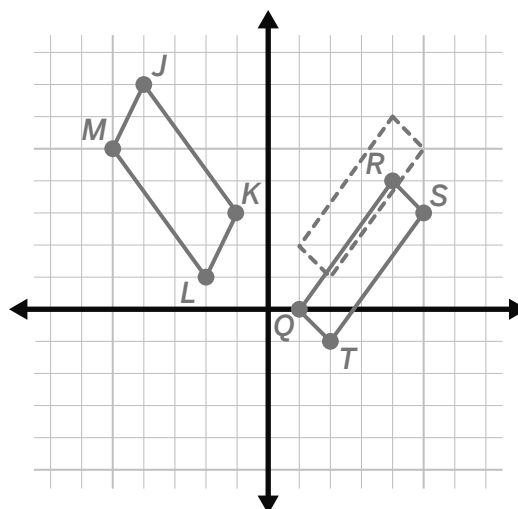


Figure $JKLM$ _____

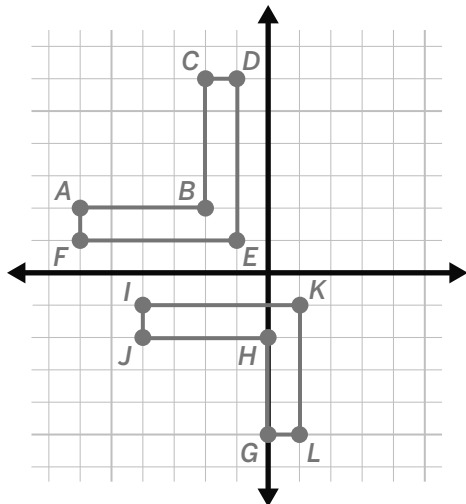


Guided Practice

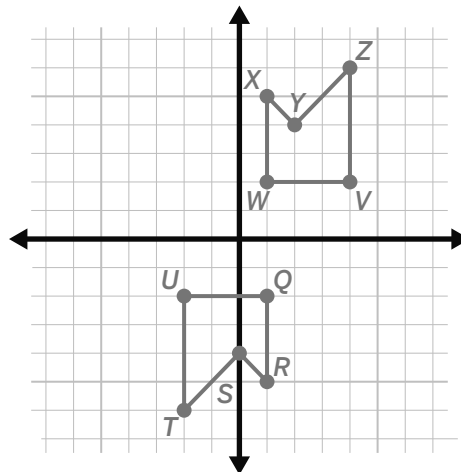


For each pair of figures, determine whether they are congruent. Explain your thinking.

3.



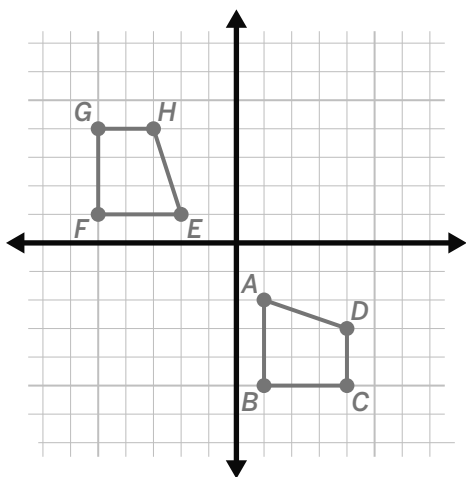
4.



Check



Determine whether Figure $ABCD$ is congruent to Figure $EFGH$. Explain your thinking.



Determining the Constant of Proportionality

ML 2.03



Modeled Review



Name: Clare

Determine the constant of proportionality for the relationship and complete the table. What does the constant of proportionality tell you about the situation?

The constant of proportionality is 5.

The paint is made with 5 cups of yellow paint for every 1 cup of blue paint.
 $2 \cdot 5 = 10$
 $6 \cdot 5 = 30$

Blue paint (cups)		Yellow paint (cups)
2	$\times 5 \rightarrow$	10
1		5
6	$\times 5 \rightarrow$	30
52		260



Guided Practice



Determine the constant of proportionality for the relationship and complete the table.

- $8 \cdot 3 = 24$
 $12 \cdot \underline{\quad} = \underline{\quad}$
 $128 \cdot \underline{\quad} = \underline{\quad}$

The constant of proportionality is _____.

Lemonade

	Volume (oz)	Sugar (g)
glass	8	$\times 3 \rightarrow 24$
bottle	12	
carton	32	96
jug	128	

- $8 \cdot \underline{\quad} = \underline{\quad}$
 $12 \cdot \underline{\quad} = \underline{\quad}$
 $128 \cdot \underline{\quad} = \underline{\quad}$

The constant of proportionality _____.

Apple juice

	Volume (oz)	Sugar (g)
glass	8	
bottle	12	
carton	32	80
jug	128	



Guided Practice



Determine the constant of proportionality for the relationship and complete the table. What does the constant of proportionality tell you about the situation?

3. The constant of proportionality is _____.

The paint is made with _____ cups of blue paint for every _____ cup of red paint.

Red paint (cups)	Blue paint (cups)
2	3
1	
6	
40	60

4. The constant of proportionality is _____.

Red paint (cups)	Yellow paint (cups)
2	8
1	
	32
50	



Check



Determine the constant of proportionality for the relationship and complete the table. What does the constant of proportionality tell you about the situation?

White paint (cups)	Red paint (cups)
2	4
1	
7	
	80

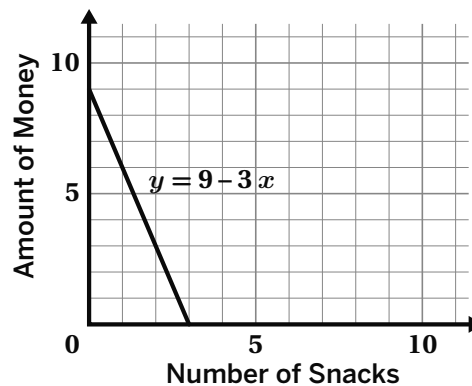


Guided Practice



The line $y = 9 - 3x$ represents Kai purchasing snacks at a soccer game.

- Write the vertical intercept as a coordinate pair. What does it represent in this situation?
- Write the horizontal intercept as a coordinate pair. What does it represent in this situation?
- What is the slope, and what does it represent?

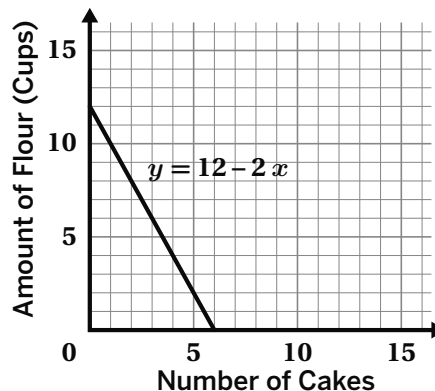


Check



The line $y = 12 - 2x$ represents Amy using flour to make cakes.

- Write the vertical intercept as a coordinate pair. What does it represent in this situation?
- Write the horizontal intercept as a coordinate pair. What does it represent in this situation?
- What is the slope, and what does it represent?



Calculating Slope Given Two Points

ML 3.09



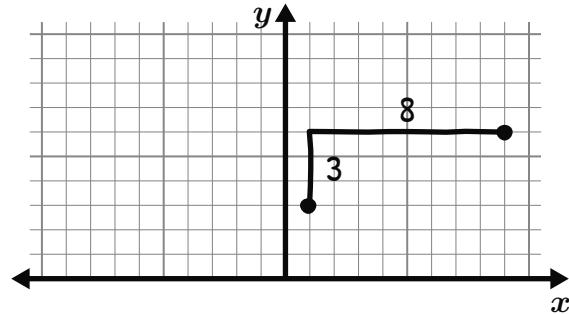
Modeled Review



Name: Han

Calculate the slope of the line that passes through (1, 3) and (9, 6). Use the graph if it is helpful.

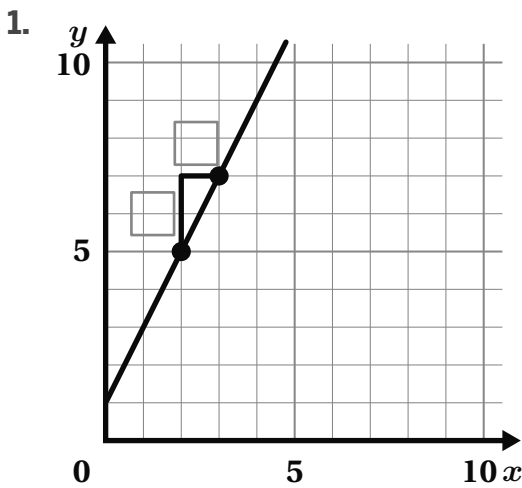
$$\text{slope} = \frac{3}{8}$$



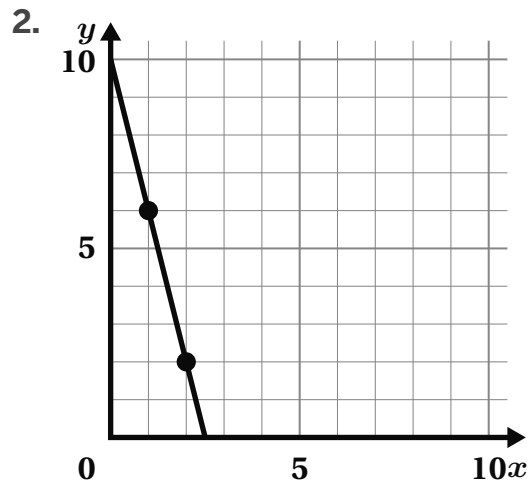
Guided Practice



Calculate the slope of the line that passes through the given points.



slope: _____



slope: _____



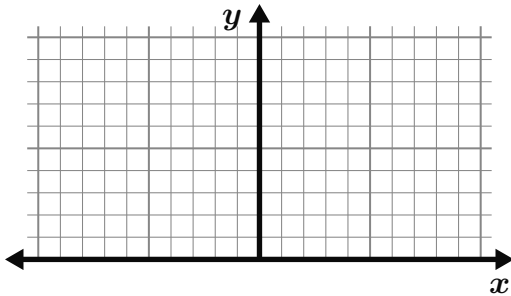
Guided Practice



Calculate the slope of the line that passes through the given points. Use the graph if it is helpful.

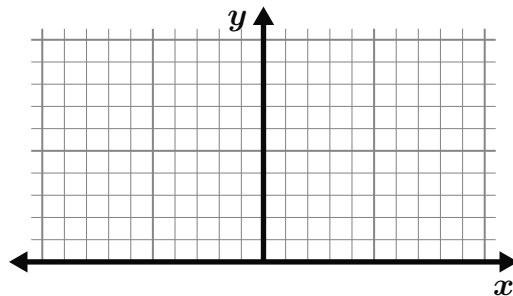
3. $(2, 4)$ and $(3, 1)$

slope: _____



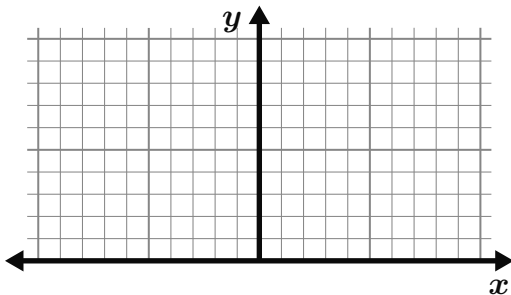
4. $(-1, 2)$ and $(4, 4)$

slope: _____



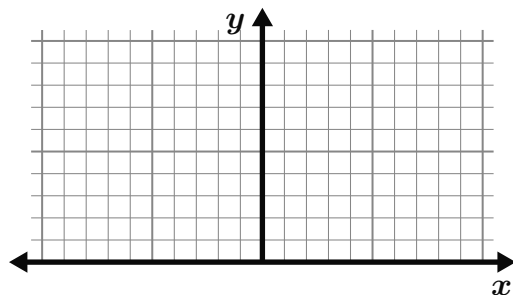
5. $(4, 2)$ and $(8, 5)$

slope: _____



6. $(6, 3)$ and $(9, 1)$

slope: _____

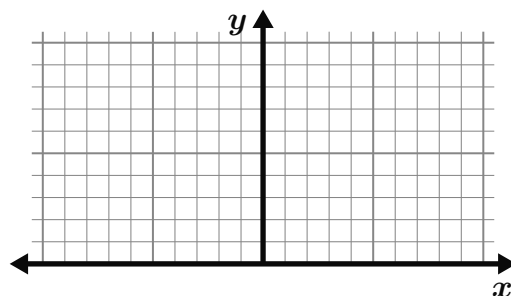


Check



Calculate the slope of the line that goes through $(2, 1)$ and $(4, 6)$. Use the graph if it is helpful.

slope: _____



Solving Linear Equations With Parentheses

ML 4.04



Modeled Review

Name: Kayla

Solve the equation.

$$-3(2x - 4) = 18$$

$$\begin{array}{l} \swarrow \quad \searrow \\ -3(2x - 4) = 18 \\ -6x + 12 = 18 \end{array}$$

$$-6x + 12 = 18$$

$$-12 \quad -12$$

$$-6x = 6$$

$$x = -1$$

Name: Isaiah

Solve the equation.

$$-3(2x - 4) = 18$$

$$\underline{-3(2x - 4) = 18}$$

$$-3 \quad -3$$

$$2x - 4 = -6$$

$$+ 4 = + 4$$

$$2x = -2$$

$$x = -1$$



Guided Practice



Solve each equation. Complete the missing steps.

1. $4x + 9 = 5x + 7$

$$\begin{array}{l} -4x \quad -4x \\ 9 = \underline{\quad} + 7 \\ -7 \quad -7 \\ \underline{\quad} = x \end{array}$$

solution: $x = \underline{\quad}$

2. $x - 8 = 10 - 5x$

$$\begin{array}{l} + \underline{\quad} + \underline{\quad} \\ 6x - 8 = 10 \\ + \underline{\quad} + \underline{\quad} \\ 6x = 18 \\ x = \underline{\quad} \end{array}$$

solution: $x = \underline{\quad}$ Solve the equation $\frac{1}{2}(4x - 2) = 11$ using two different methods.

3. $\frac{1}{2}(4x - 2) = 11$

$$\begin{array}{l} \times 2 \quad \times 2 \\ 4x - 2 = \underline{\quad} \\ \underline{\quad} \quad \underline{\quad} \\ 4x = 24 \\ x = \underline{\quad} \end{array}$$

solution: $x = \underline{\quad}$

4. $\frac{1}{2}(4x - 2) = 11$

$$\begin{array}{l} 2x - \underline{\quad} = 11 \\ + 1 + \underline{\quad} \\ 2x = \underline{\quad} \\ x = \underline{\quad} \end{array}$$

solution: $x = \underline{\quad}$



Guided Practice



Solve each equation.

5. $4(3x + 5) = -2(-8x + 6)$

$\underline{\hspace{1cm}}x + 20 = \underline{\hspace{1cm}}x - \underline{\hspace{1cm}}$

$\underline{\hspace{1cm}} \quad \underline{\hspace{1cm}}$
 $20 = \underline{\hspace{1cm}}x - 12$

$\underline{\hspace{1cm}} \quad \underline{\hspace{1cm}}$
 $32 = \underline{\hspace{1cm}}x$

$\underline{\hspace{1cm}} = x$

solution: $x = \underline{\hspace{1cm}}$

6. $-2(2x + 3) = 3(x + 5)$

solution: $x = \underline{\hspace{1cm}}$

7. $\frac{1}{3}(x - 5) = 2(x - 1)$

solution: $x = \underline{\hspace{1cm}}$

8. $0.5(x - 4) = -3(2x + 5)$

solution: $x = \underline{\hspace{1cm}}$



Check



Solve the equation.

$$-2(5x - 3) = 3(-4x + 8)$$

solution: $x = \underline{\hspace{1cm}}$

Solving Systems of Linear Equations by Graphing

ML 4.11



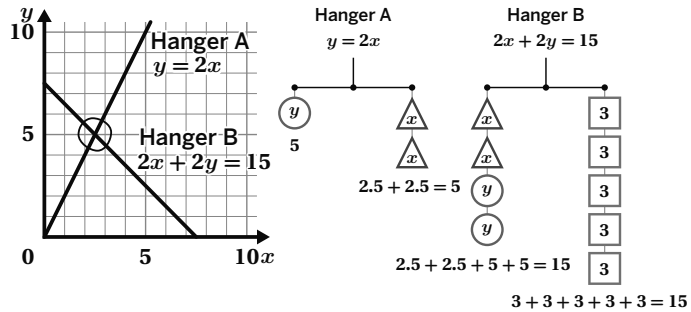
Modeled Review



Name: Clare

Use these hanger diagrams and the related graph to complete the problems.

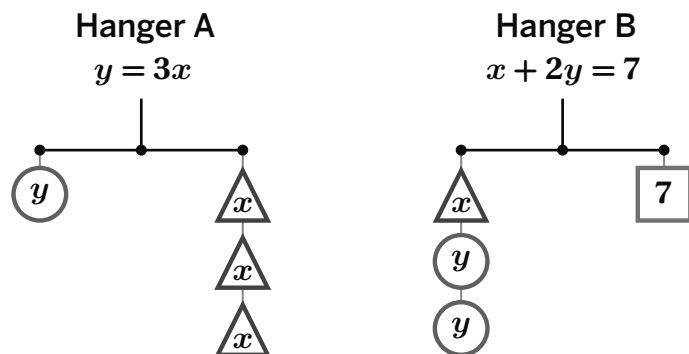
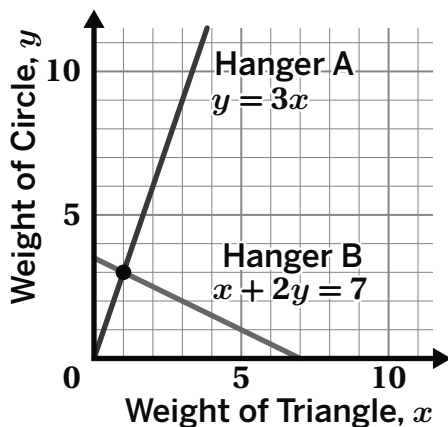
- Determine the solution to the system of equations. **(2.5, 5)**
- What does the solution tell you about the weight of the circle and the triangle to balance both hangers?
Each triangle weighs 2.5 and each circle weighs 5.



Guided Practice



Use these hanger diagrams and the related graph to complete the problems.



- Determine the solution to the system of equations.

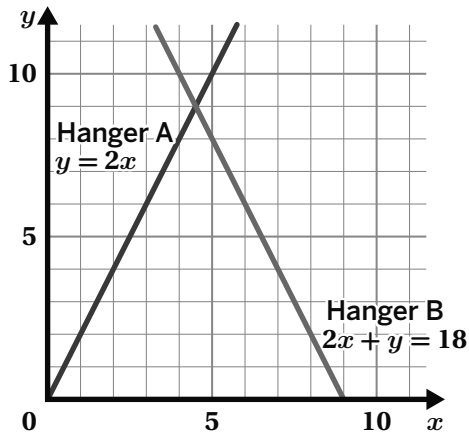
- What does the solution tell you about the weight of the circle and the triangle to balance both hangers?
Each triangle weighs 1 and each circle weighs ____.



Guided Practice

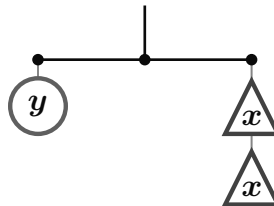


Use these hanger diagrams and the related graph to complete the problems.



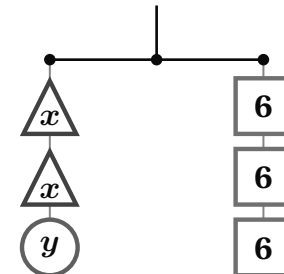
Hanger A

$$y = 2x$$



Hanger B

$$2x + y = 18$$



3. Determine the solution to the system of equations.

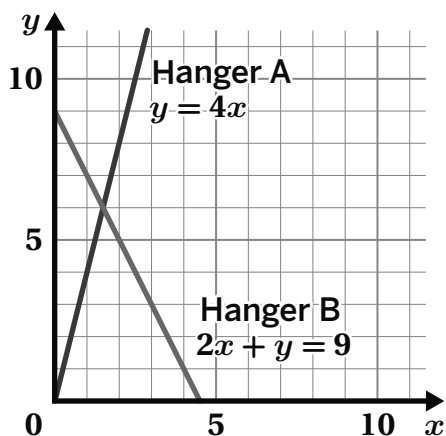
4. What does the solution tell you about the weight of the circle and the triangle to balance both hangers?



Check

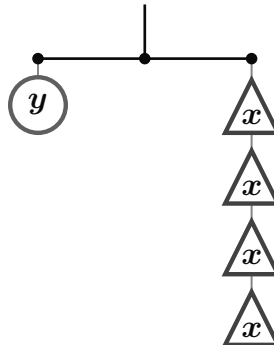


Use these hanger diagrams and the related graph to complete the problems.



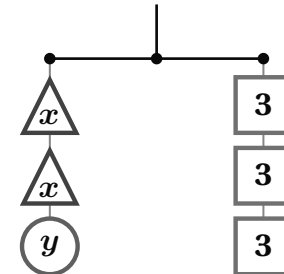
Hanger A

$$y = 4x$$



Hanger B

$$2x + y = 9$$



3. Determine the solution to the system of equations.

4. What does the solution tell you about the weight of the circle and the triangle to balance both hangers?

Justifying Whether a Graph Represents a Function

ML 5.03

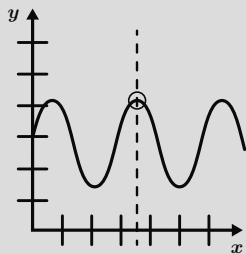


Modeled Review

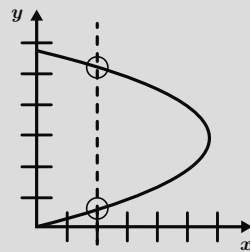


Function: a rule that assigns exactly one output to each possible input.

Function



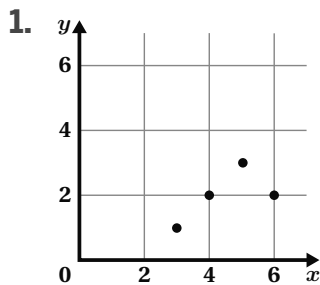
Not a function



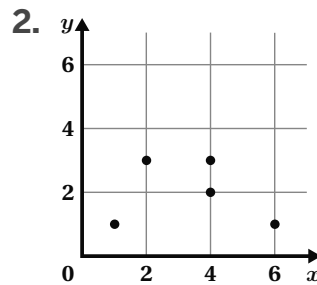
Guided Practice



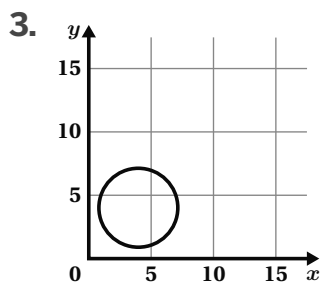
Determine whether the graph is a function. If the graph is not a function, draw a vertical line where the graph shows more than one output for the same input.



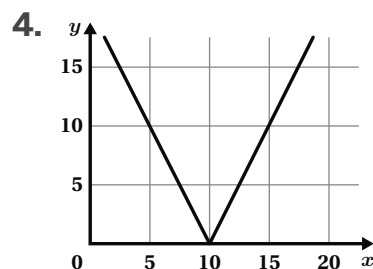
Function Not a function



Function Not a function



Function Not a function



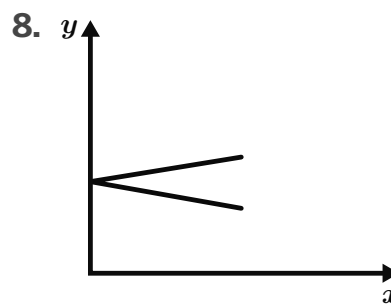
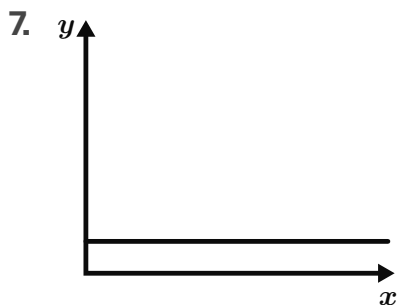
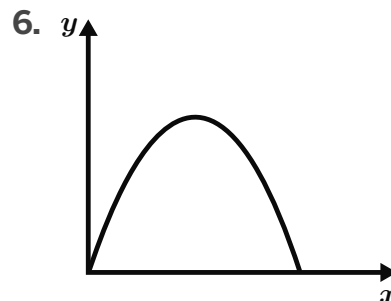
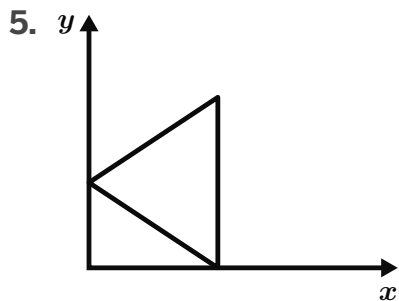
Function Not a function



Guided Practice



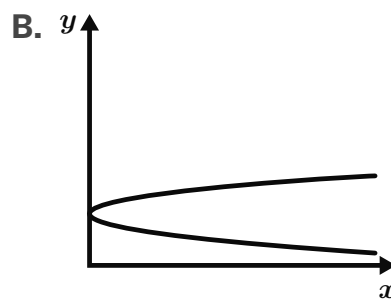
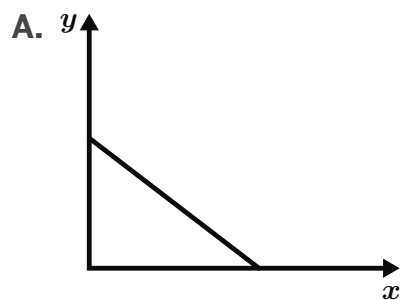
Determine whether y is a function of x and write “function” or “not a function.” If the graph is not a function, draw a vertical line where the graph shows more than one output for the same input.



Check



Select the graph in which y is a function of x . On the graph that is not a function, draw a vertical line where the graph shows more than one output for the same input.



Interpreting Points on a Scatter Plot

ML 6.03



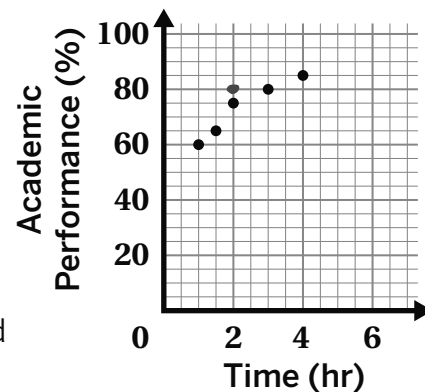
Modeled Review



Name: Diego

This scatter plot shows the academic performance and the number of hours students studied for a math test.

1. What is the highest academic performance a student received?
85%
2. What is the academic performance of the student who studied the least?
60%
3. Another student studied 2 hours and earned an academic performance of 80%. Plot a point on the graph that represents this student.



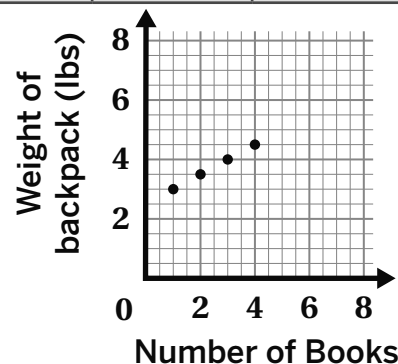
Guided Practice



The table and scatter plot show the number of books each student carried in their backpack and the corresponding weight of each backpack.

1. Circle the point on the scatter plot that represents the data for Mia.
2. What does the point (3, 4) represent?
3. In the same study, the data showed that Arjun had a backpack weighing 5 pounds with 6 books. Add a point to the scatter plot to represent Arjun.

Student	Number of books	Backpack weight (lbs)
Isaiah	1	3
Kayla	3	4
Mia	2	3.5
Felipe	4	4.5



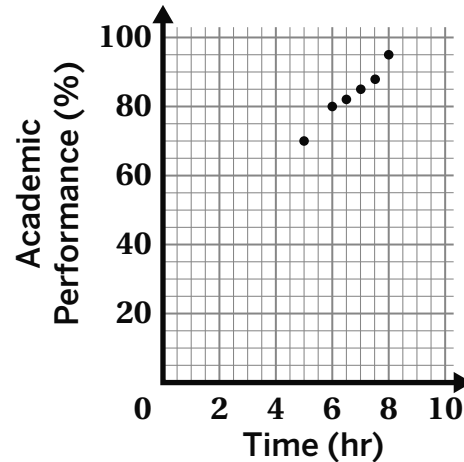


Guided Practice



This scatter plot illustrates the connection between the amount of sleep students get each night and their academic performance.

- What is the highest academic performance a student received?
- How many hours did the student who received the highest academic performance sleep?
- The academic performance for a student who slept 5 hours is 50%. Plot a point on the graph that represents this student.

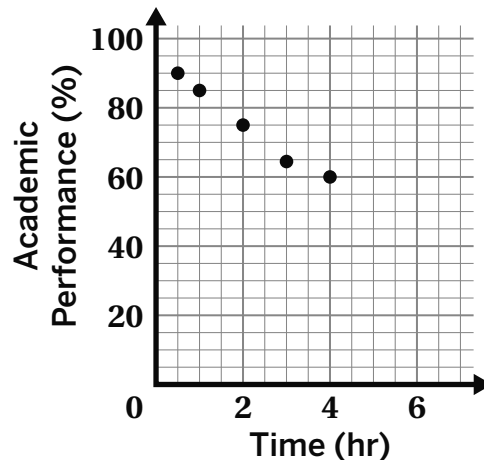


Check



This scatter plot shows the academic performance and the number of hours of screen time students have.

- What is the highest academic performance observed in a student?
- What is the lowest academic performance observed in a student?
- The academic performance for a student who had 4 hours of screen time is 75%. Plot a point on the graph that represents this student.



Using Lines of Fit to Make Predictions

ML 6.09



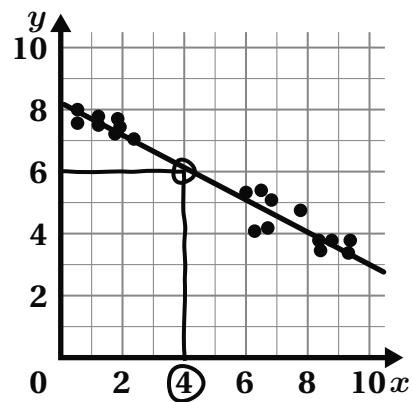
Modeled Review



Name: Tristan

Use the line of fit to predict the y -value of a new data point whose x -value is 4.

6

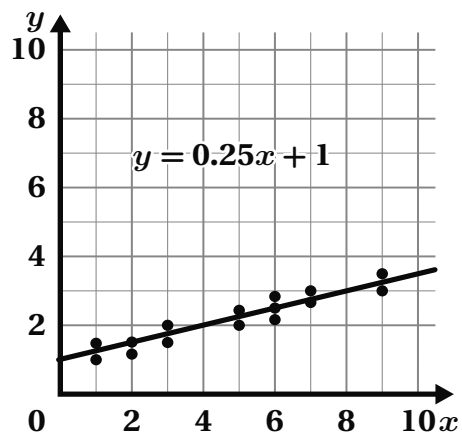


Guided Practice



1. Use the line of fit to make predictions and complete the table.

x	y
4	
8	

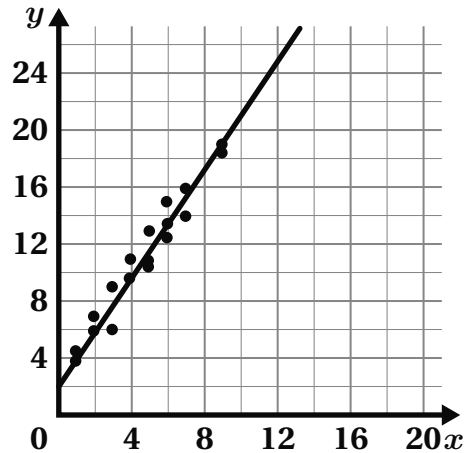




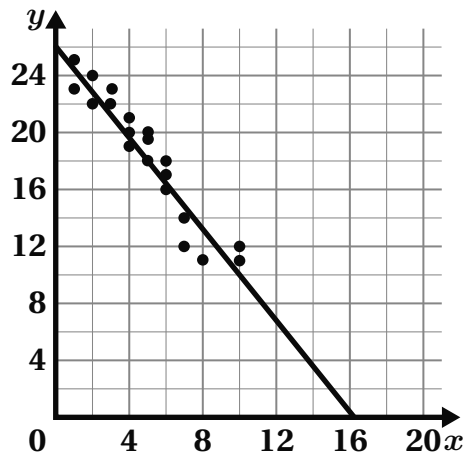
Guided Practice



2. Use the line of fit to predict the y -value of a new data point whose x -value is 8.



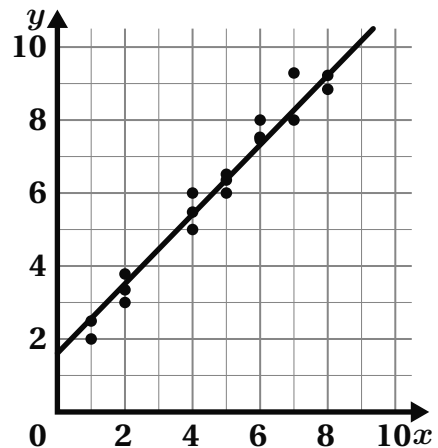
3. Use the line of fit to predict the y -value of a new data point whose x -value is 12.



Check



- Use the line of fit to predict the y -value of a new data point whose x -value is 3.



Calculating Missing Values in Two-Way Tables

ML 6.10



Modeled Review

Name: Avery

A group of people were asked whether or not they liked their food and if they were satisfied with the service at a restaurant. Some of the responses are recorded in the two-way table. Calculate the missing values.

$$81 - 72 = 9$$

$$29 - 21 = 8$$

$$72 + 8 = 80$$

$$81 + 29 = 110$$

	Satisfied	Dissatisfied	Total
Liked food	72	8	80
Did not like food	9	21	30
Total	81	29	110



Guided Practice



For Problems 1–2, use the number bank to fill in the missing values in each two-way table.

60	33	10	12	5	46
----	----	----	----	---	----

- Customers were surveyed about their preference for outdoor or indoor seating and whether they found the restaurant's ambiance satisfactory. Some of the responses are recorded in the two-way table.

	Satisfied	Unsatisfactory	Total
Outdoor	20		25
Indoor		35	45
Total	30	40	70

- Participants in a wellness retreat were surveyed on their interest in meditation or yoga and their perception of mental health benefits. Some of the responses are recorded in the two-way table.

	Beneficial	Not beneficial	Total
Meditation		13	25
Yoga	27		
Total	39		85



Guided Practice



3. Visitors to a museum were surveyed on their enjoyment of the interactive exhibits and if they found the staff's assistance helpful. Some of the responses are recorded in the two-way table. Calculate the missing values.

	Helpful	Not helpful	Total
Enjoyed	45	25	
Did not enjoy		15	
Total	65		105

4. Patients in a healthcare facility were surveyed on their comfort with medical staff and satisfaction with care quality. Some of the responses are recorded in the two-way table. Calculate the missing values.

	Satisfied	Not satisfied	Total
Comfortable	33	21	
Not comfortable		27	
Total	52		100

5. Students were polled about their preference for group projects or individual assignments and their satisfaction with the level of challenge in the coursework. Some of the responses are recorded in the two-way table. Calculate the missing values.

	Satisfied	Not satisfied	Total
Individual	56		65
Group	37	13	
Total		22	



Check



Participants in a fitness program were asked about their preference for cardio or strength training and how they rated the effectiveness of the program. Some of the responses are recorded in the two-way table. Calculate the missing values.

	Effective	Not effective	Total
Cardio		20	
Strength	12		20
Total	92	28	

Multiplying Powers

ML 7.03



Modeled Review



Name: Jack

Decide if the expressions in each pair are equivalent. Show your thinking.

Expression 1	Expression 2	Equivalent?
$(5^5)^2$ $(5^5) \cdot (5^5)$ $(5 \cdot 5 \cdot 5 \cdot 5 \cdot 5) \cdot (5 \cdot 5 \cdot 5 \cdot 5 \cdot 5)$	$5^4 \cdot 5^3$ $(5 \cdot 5 \cdot 5 \cdot 5) \cdot (5 \cdot 5 \cdot 5)$	Yes <input checked="" type="radio"/> No <input type="radio"/>
$4^3 \cdot 2^5$ $(4 \cdot 4 \cdot 4) \cdot (2 \cdot 2 \cdot 2 \cdot 2 \cdot 2)$ $(4 \cdot 2)(4 \cdot 2)(4 \cdot 2) \cdot 2 \cdot 2$	8^8 $(8 \cdot 8 \cdot 8 \cdot 8 \cdot 8 \cdot 8 \cdot 8 \cdot 8)$	Yes <input type="radio"/> No <input checked="" type="radio"/>
$15^3 \cdot 2^3$ $(15 \cdot 15 \cdot 15) \cdot (2 \cdot 2 \cdot 2)$ $(15 \cdot 2)(15 \cdot 2)(15 \cdot 2)$	$(5 \cdot 2)^3 \cdot 3^3$ $(10 \cdot 10 \cdot 10) \cdot (3 \cdot 3 \cdot 3)$ $(10 \cdot 3)(10 \cdot 3)(10 \cdot 3)$	<input checked="" type="radio"/> Yes <input type="radio"/> No



Guided Practice



1. Match each expression to the correct expanded form on the right.

Expression

Expanded Form

$(3^4)^2$

$3 \cdot 3 \cdot 3 \cdot 3 \cdot 3 \cdot 3 \cdot 3 \cdot 3$

3^9

$(3 \cdot 3 \cdot 3) \cdot (3 \cdot 3 \cdot 3)$

$(3^3) \cdot (3^3)$

$(3 \cdot 3 \cdot 3 \cdot 3) \cdot (3 \cdot 3 \cdot 3 \cdot 3)$



Guided Practice



2. Decide if the expressions in each pair are equivalent. Show your thinking.

Expression 1	Expression 2	Equivalent?
$(7^4)^2$	49^4	Yes No
$6^3 \cdot 2^4$	$(2 \cdot 2)^3 \cdot 3^3$	Yes No
$5^3 \cdot 2^3$	10	Yes No
$(6^4)^2$	$6^4 \cdot 6^2$	Yes No
$8^4 \cdot 3^3$	$(3 \cdot 2)^4 \cdot 4^3$	Yes No



Check



Decide if the expressions in each pair are equivalent. Show your thinking.

Expression 1	Expression 2	Equivalent?
$(4^3)^2$	$4^3 \cdot 4^3$	Yes No
$3^2 \cdot 2^3$	6^5	Yes No

Approximating Square Roots

ML 8.03



Modeled Review



Name: Evan

Approximate $\sqrt{18}$.

$\sqrt{18}$ is between 4.2 and 4.3

I multiplied 4.1, 4.2, and 4.3 by themselves to find their squares.

n	n^2
4.1	16.81
4.2	17.64
4.3	18.49

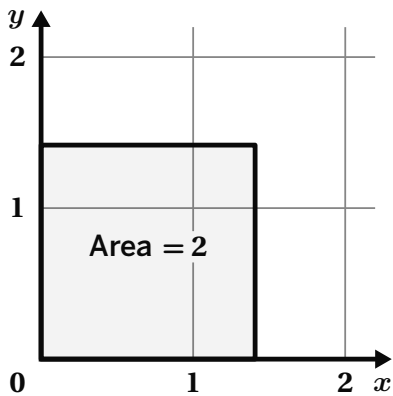


Guided Practice



Approximate the square root using the side lengths of the squares and the tables.

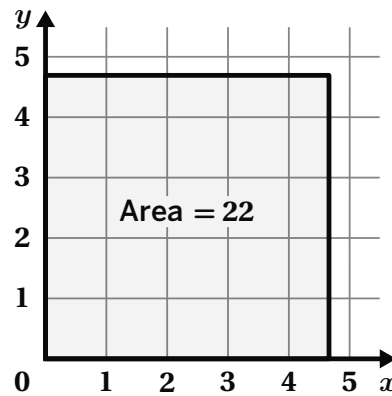
1. $\sqrt{2}$



n	n^2
1.4	1.96
1.5	

$\sqrt{2}$ is between _____ and _____

2. $\sqrt{22}$



n	n^2
4.6	

$\sqrt{22}$ is between _____ and _____



Guided Practice



For Problems 3–6, complete the table to approximate the square root.

3. $\sqrt{6}$ is between _____ and _____

n	n^2
2.3	5.29
2.4	

4. $\sqrt{10}$ is between _____ and _____

n	n^2
3.1	

5. $\sqrt{15}$ is between _____ and _____

n	n^2

6. $\sqrt{40}$ is between _____ and _____

n	n^2



Check



Approximate $\sqrt{28}$.

$\sqrt{28}$ is between _____ and _____

n	n^2

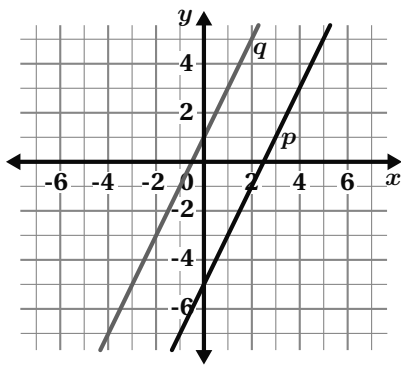
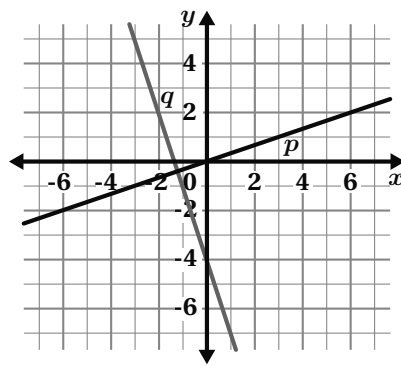
Writing Equations for Parallel and Perpendicular Lines

ML 3.15



Modeled Review



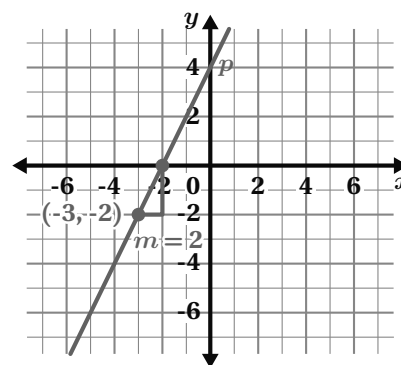
Parallel	Perpendicular
<p>Lines with the same slopes.</p> <p>Example</p> <p>line p: $y + 1 = 2(x - 3)$</p> <p>line q: $y - 3 = 2(x - 1)$</p> 	<p>Lines with opposite reciprocal slopes.</p> <p>Example</p> <p>line p: $y - 2 = \frac{1}{3}(x - 6)$</p> <p>line q: $y + 1 = -3(x + 1)$</p> 



Guided Practice



- Complete each step to solve the problem.

Problem	Steps
<p>Write an equation for a line that passes through the point $(-3, -2)$ and is perpendicular to line $y = 2x + 4$.</p> 	<p>Step 1: Determine the opposite reciprocal of the slope and substitute it into the point-slope equation.</p> $m = \underline{\hspace{2cm}}$ $y - y_1 = \underline{\hspace{2cm}}(x - x_1)$ <p>Step 2: Substitute ordered pair $(-3, -2)$ into the point-slope equation.</p> $y - \underline{\hspace{2cm}} = \underline{\hspace{2cm}}(x - \underline{\hspace{2cm}})$ <p>Step 3: Simplify if possible.</p> $y \underline{\hspace{2cm}} = \underline{\hspace{2cm}}(x \underline{\hspace{2cm}})$

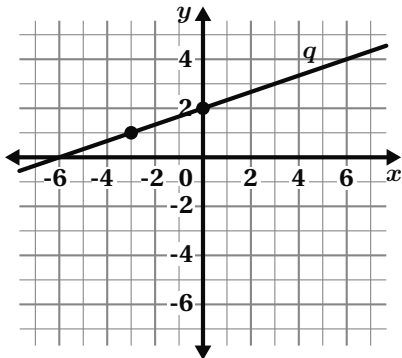


Guided Practice



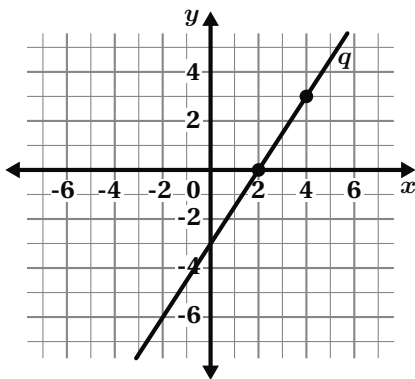
For Problems 2–3, write equations for parallel and perpendicular lines in point-slope form, $y - y_1 = m(x - x_1)$.

2. Line p is parallel to line q and passes through the point $(-6, 1)$. Write an equation for line p .



equation: _____

3. Line p intersects line q at the point $(4, 3)$ and is perpendicular to line q . Write an equation for line p .



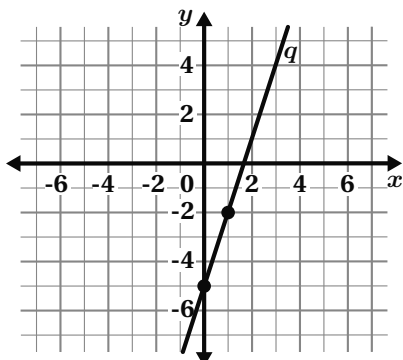
equation: _____



Check



Line p intersects line q at the point $(1, -2)$ and is perpendicular to line q . Write an equation for line p in point-slope form.



equation: _____

Drawing Perpendicular Bisectors

ML 6.04



Modeled Review

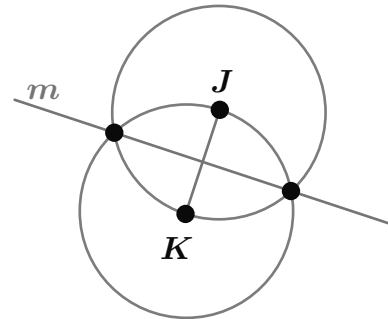


Perpendicular bisector

Line m is the perpendicular bisector of \overline{JK} .

Perpendicular bisectors:

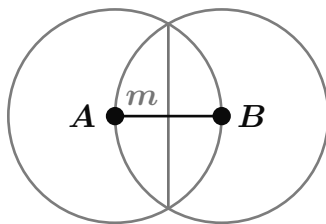
- always pass through a segment's midpoint
- can be found by connecting the intersections of two circles



Guided Practice

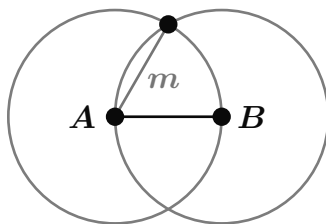


1. For each diagram, indicate whether line m has been properly constructed as a perpendicular bisector of AB .



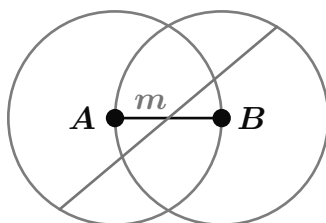
perpendicular bisector

not a perpendicular bisector



perpendicular bisector

not a perpendicular bisector



perpendicular bisector

not a perpendicular bisector

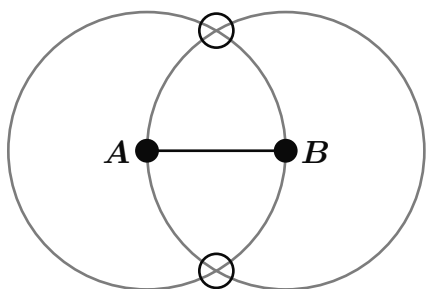


Guided Practice

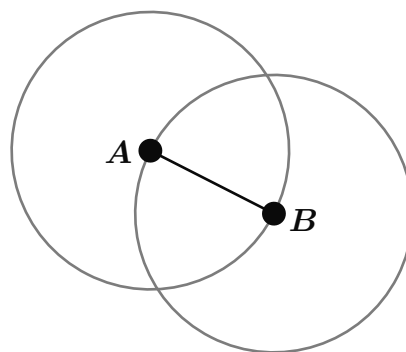


For each problem, use a straightedge to construct the perpendicular bisector of segment AB .

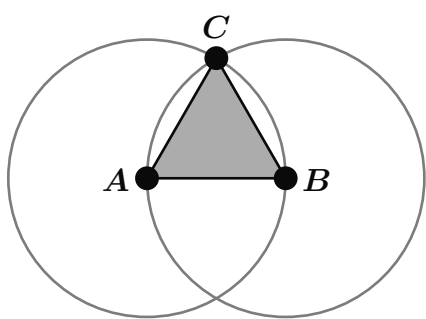
2.



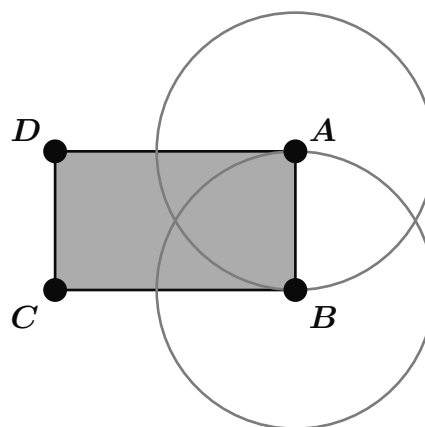
3.



4.



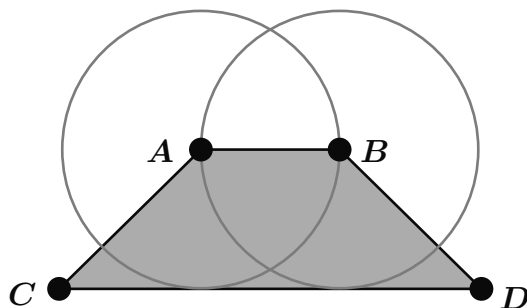
5.



Check



Use a straightedge to construct the perpendicular bisector of segment AB .





Extensions

Name: Date: Period:

Student Choice

Pick any problem to start with. Remember to show or explain your thinking.

1

Let's assume the initial thickness of a paper is 0.001 centimeters and you can fold this very very thin paper infinitely many times.

- a** How many folds would result in the same thickness of a 500-page book made from the same paper?

- b** How many folds would result in the same thickness of 500 of those books?

- c** How many folds would result in the same height as the Empire State Building?

- d** How many times do you need to fold the paper to get to the Moon?

- e** How many times do you need to fold the paper to get to the Moon and come back?



Name: Date: Period:

2

The table shows a sequence resulting from consecutive sums.

- a** Complete the table using the consecutive sums.
- b** Create a visual pattern of this sequence.

Consecutive sums	Sequence
1	1
1 + 2	3
1 + 2 + 3	6
1 + 2 + 3 + 4	
1 + 2 + 3 + 4 + 5	
1 + 2 + 3 + 4 + 5 + 6	
1 + 2 + 3 + ... + 10	

- c** This sequence is called the *triangular number* sequence.

Why do you think these numbers are called triangular? Is there a constant rate or difference between the terms of the sequence?

- d** Determine a way to find the n^{th} term of a sequence.

Name: Date: Period:













Student Choice

Start with any problem. Remember to show or explain your thinking.

1

Here are Stages 1–3 of four visual patterns. Complete the table.

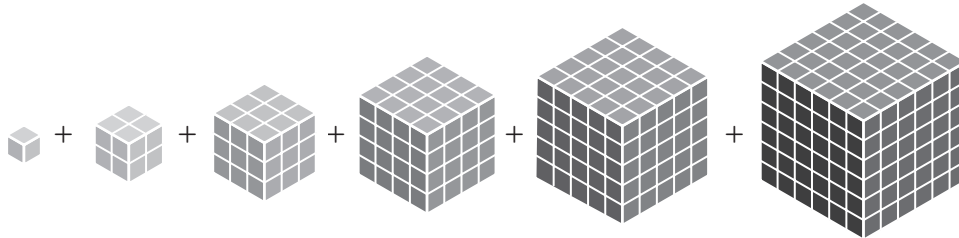
- For each pattern, determine the number of tiles or cubes that will be in Stage 4 and Stage 5.
- For each pattern, write an explicit expression for the number of tiles or cubes in Stage n .

Stages 1–3			Stage 4	Stage 5	n^{th} term
 1 tile	 3 tiles	 9 tiles			
 1 cube	 7 cubes	 19 cubes			
 3 tiles	 10 tiles	 21 tiles			
 1 cube	 4 cubes	 10 cubes			

Name: Date: Period:

2

The result of multiplying the same number three times is called a *cube number*. Here is a visual of the sum of the first six cube numbers.



- a What is the sum of the first three cube numbers? The first four? The first six?
- b What is the sum of the first n cube numbers?

3

The Fibonacci series is a series of numbers in which each number is the sum of the two preceding numbers: 1, 1, 2, 3, 5, 8, 13, 21, 34, 55, 89 . . .

- a Complete the table to extend the Fibonacci series backward from 0.

F_{-6}	F_{-5}	F_{-4}	F_{-3}	F_{-2}	F_{-1}	F_0	F_1	F_2	F_3	F_4	F_5	F_6
						0	1	1	2	3	5	8

- b What do you notice?

Name: Date: Period:

Remember to show or explain your thinking.

1

A magician asked everyone in the audience to think of a number, and then follow these steps:

- Step 1: Add 4.
 - Step 2: Multiply by 4.
 - Step 3: Subtract 4.
 - Step 4: Divide by 4.
 - Step 5: Subtract your original number.
- a** Think about a number between 1 and 10 and follow the steps. What is your final number?
- b** Emma's initial number was 7. What is the final number she ended up with?
- c** Mayra thought of an integer and followed the same steps. What answer did she end up with?
- d** Will this work for numbers that are not whole numbers between 1 and 10? What numbers will it work for?
- e** Repeat the same trick with $2s$, $3s$, \dots , ns instead of $4s$. What are the final answers?

Name: Date: Period:

2

A magician asked everyone in the audience to think of a number, and then follow these steps:

- Step 1: Triple the number.
- Step 2: Add 45 to the result.
- Step 3: Double the result.
- Step 4: Divide the result by 6.
- Step 5: Subtract the number by the first number you started with.

Then she added, “When you are finished, you should all have the same number.”

What is the number? How did the magician know it would be the same for everyone?

3

Design your own math magic trick that ends with the number 8. Your trick should have multiple steps.

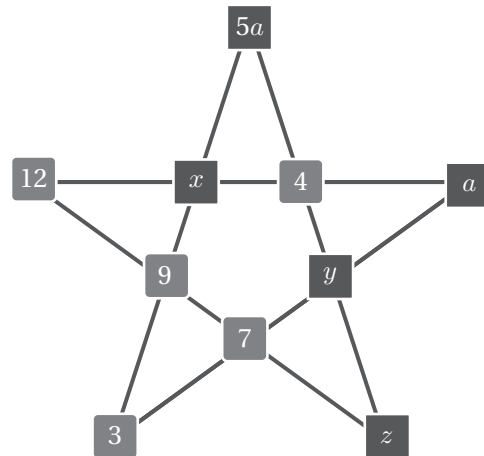
Name: Date: Period:

Remember to show or explain your thinking.

1

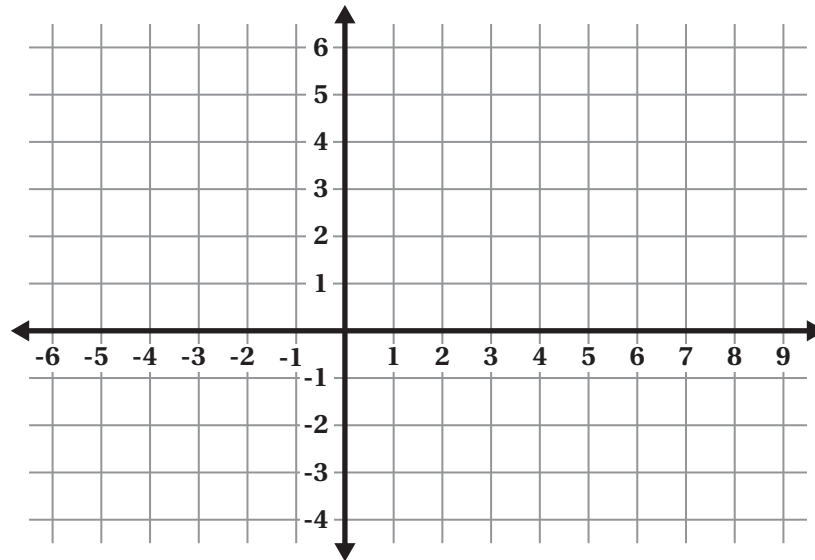
Here is a figure where the four values along each line have a sum of 30.

Determine the values of x , y , z , and a .



2

- a** A triangle is formed by the lines $y = -2$, $y = 2x + 8$, and $2x + 3y = 12$. What is the area of the triangle?



- b** John added a line that divides the triangle into two equal areas. What could be an equation of John's line?

Name: Date: Period:

3

Let x and y be the first two terms of a Fibonacci-like sequence, where each term is the sum of the two preceding terms

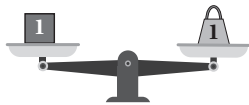
- a** Write the next five terms. What do you notice?
- b** The fifth term of the sequence is 19 and the eighth term is 81. What are the first two terms, x and y , of this sequence?

4

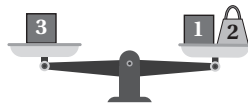
A set of five weights can balance any object with an integer weight from 1 to 120 kilograms on a two-sided scale.

Here are examples of two of the five weights:

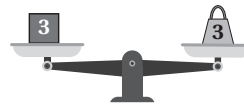
To weigh a 1 kg object, you can use the 1 kg weight.



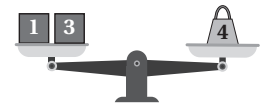
To weigh a 2 kg object, you can use the 1 kg and 3 kg weights.



To weigh a 3 kg object, you can use the 3 kg weights.



To weigh a 4 kg object, you can again use the 1 kg and 3 kg weights.



- a** What one additional weight can you add to the set to weigh any object up to 13 kilograms?
- b** Complete the set of five weights so that it can balance any object with a weight up to 120 kilograms.

Name: Date: Period:

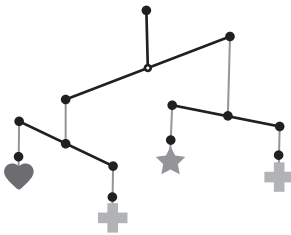
Student Choice Remember to show or explain your thinking.

1

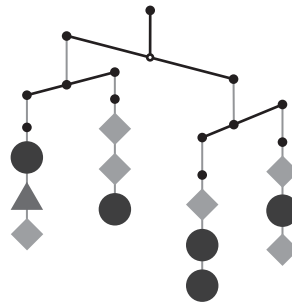
Here are three imbalanced hangers.

For each hanger, write an inequality statement that orders the shapes from lightest to heaviest.

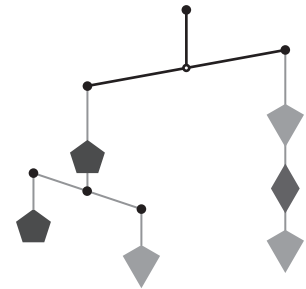
Hanger A



Hanger B



Hanger C



2

Create your own imbalanced hanger where there is only one way to order the shapes from lightest to heaviest.

Name: Date: Period:

3

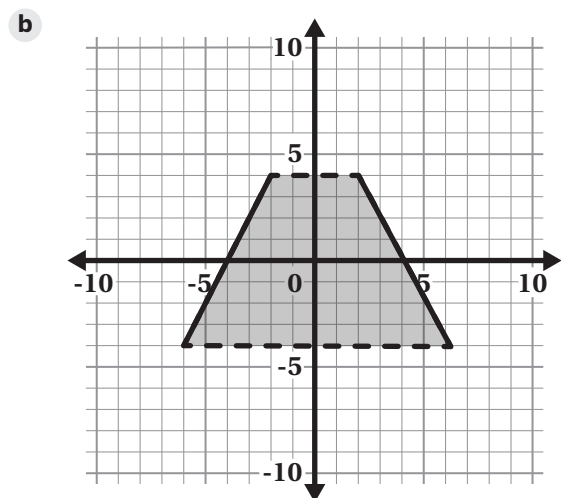
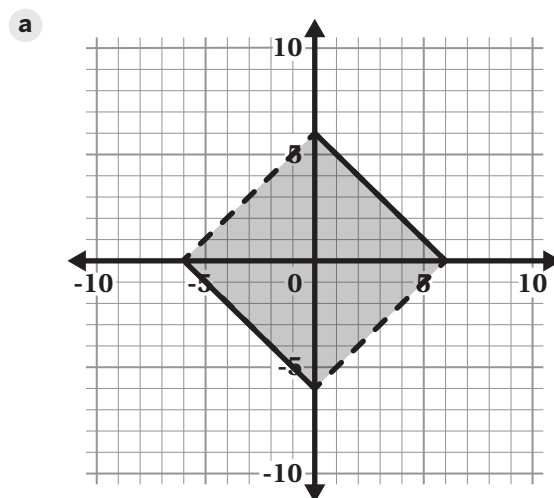
Determine a pair of values x and y for which each statement is true and false.

	Statement	True	False
a	If $x \geq y$, then $ x \leq y $		
b	If $x \leq 0$, and $y > 0$, then $x \cdot y \geq 0$		
c	If $x > y$, then $x \cdot y \geq y^2$		
d	$ x + y > x + y$		

4

Anna draws polygons on a coordinate plane using inequalities.

Determine the set of inequalities she used to create each polygon.



Name: Date: Period:

Student Choice Start with any problem. Remember to show or explain your thinking.

1

Here is a 3×3 square and a 5×5 square. Except for the last row and column of each square, the sums of each column and row is given. Determine the value of each letter.

a

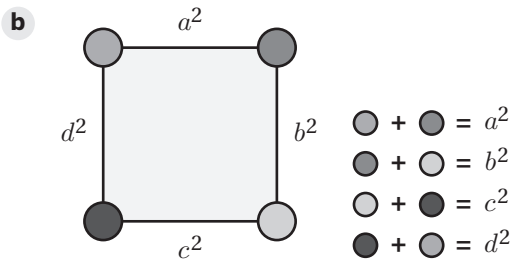
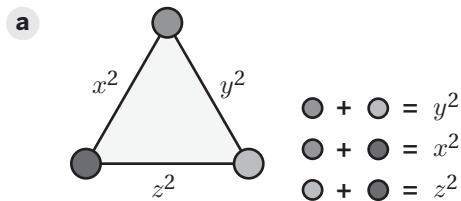
x	z	y	10
y	x	x	14
y	z	z	?
13	7	?	

b

c	a	c	c	a	16
d	a	a	d	b	19
c	a	d	a	b	17
b	a	a	c	e	16
e	c	c	e	b	?
12	22	18	16	?	

2

Determine the whole number value of each circle so that the sum of the two numbers along any given side is a square of another number.



Name: Date: Period:

3

A rectangle has a perimeter of 29 centimeters. If Trevon adds 3 centimeters to the width and subtracts 4 centimeters from the length, the area does not change. Determine the length and width of the rectangle.

4

The point (8, -3) is the intersection of the graphs of $ax + by = 25$ and $3ax - 5by = 3$. Determine the values of a and b .

5

Prisha has 30 coins worth \$4.60, consisting of nickels, dimes, and quarters. There are two more dimes than quarters. How many of each kind of coin does she have?

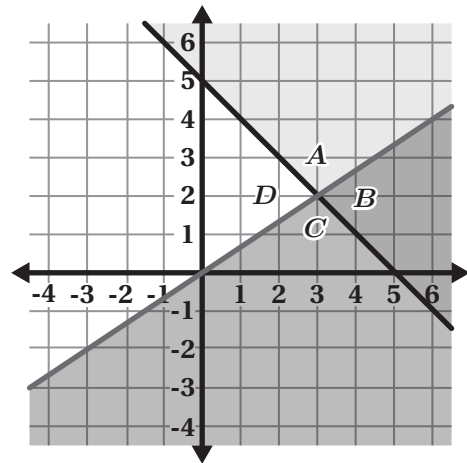
Name: Date: Period:

Remember to show or explain your thinking.

1

Determine the system of inequalities . . .

- a** whose solution is Region *A*.
- b** whose solution is Region *B*.
- c** whose solution is Region *C*.
- d** whose solution is Region *D*.



2

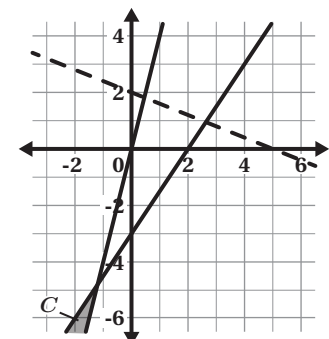
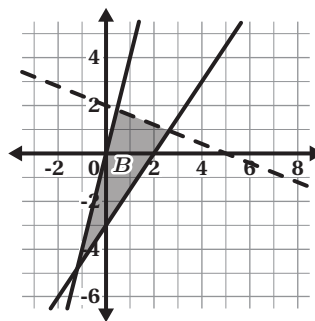
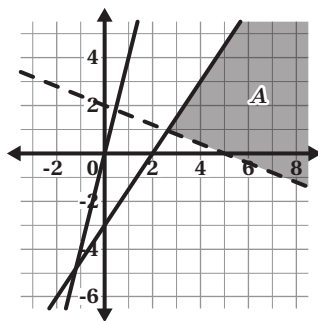
Here is a system of inequalities with missing inequality symbols.

$$y \square 4x$$

$$2x + 5y \square 10$$

$$3x - 2y \square 6$$

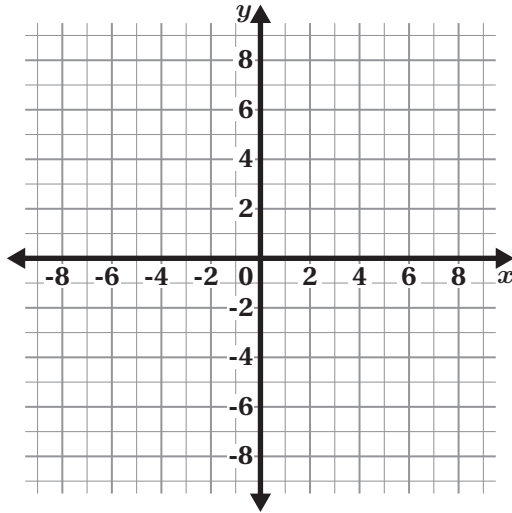
- a** Determine the symbols if there is no solution.
- b** Determine the symbols if the solution is Region *A*.
- c** Determine the symbols if the solution is Region *B*.
- d** Determine the symbols if the solution is Region *C*.



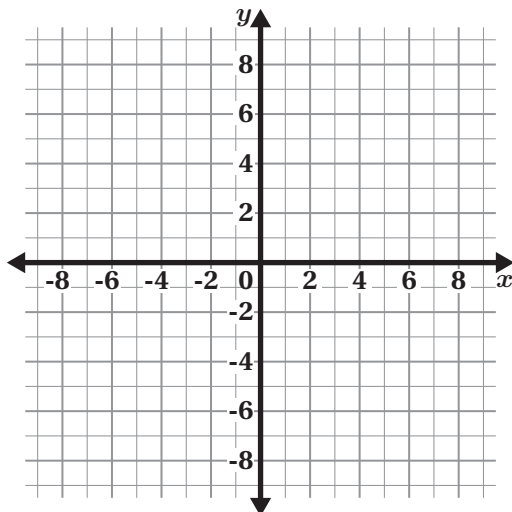
Name: Date: Period:

3

- a** Create your own system of inequalities whose solution is a single point. How do you know the solution is a single point?



- b** Create your own system of inequalities whose solution is a square. How do you know the solution is a square?



Name: Date: Period:

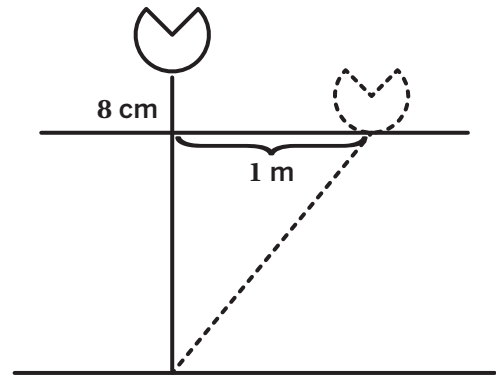
Student Choice

Start with any problem. Remember to show or explain your thinking.

1

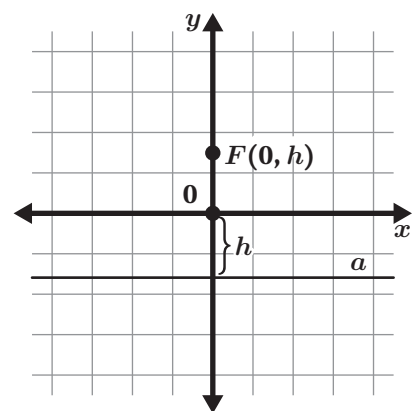
A lily flower rises 8 centimeters above the surface of a pond. If you pull the lily flower by its stem, the flower will touch the water 1 meter away from its original position.

Determine the depth of the pond at the location of this lily flower.

**2**

Recall that all points that are at a given distance from a fixed point form a circle.

Sketch and describe the figure that consists of points that are equidistant from the fixed point F and the horizontal line a .



Name: Date: Period:

Student Choice

Complete Problem 1 before starting Problem 2. Remember to show or explain your thinking.

1

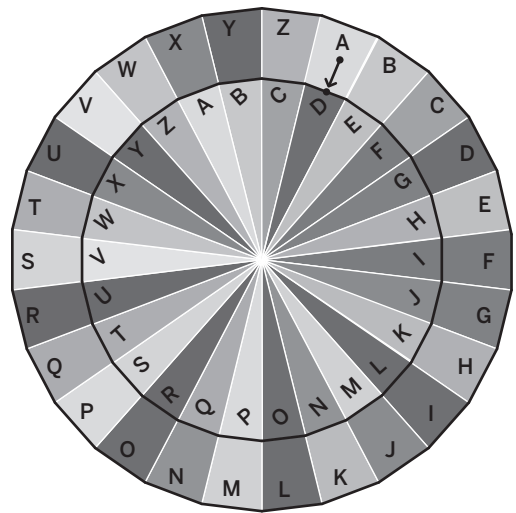
The *Caesar Cipher* is simply a type of substitution cipher, i.e., each letter of a given text is replaced by a letter with a fixed number of positions down the alphabet.

- a** The smaller disk is rotated to shift each letter 3 steps forward:

$$s(x) = x + 3$$

Encode the word “Amplify” using the Caesar Cipher with the shift

$$s(x) = x + 3.$$



- b** Encode a word you like and exchange with a classmate to decode.
- c** Decode “Ohw'v ohduq wrjhwkhu” using $s(x) = x + 3$.
- d** What other way can you write the same function, $s(x) = x + 3$, on the Caesar wheel?

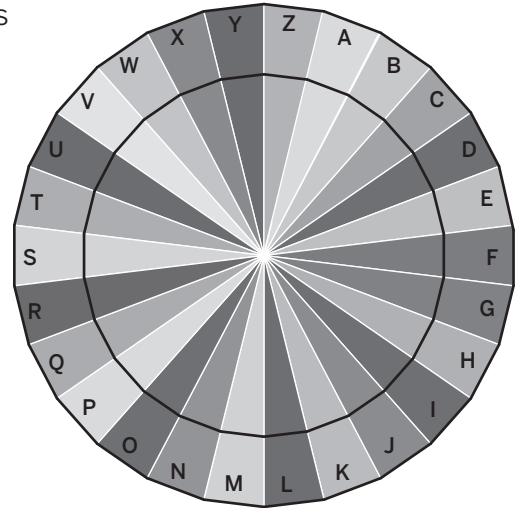
Name: Date: Period:

2

Here is a blank cipher where the coding rule is not known.

- a Decode the text.

X jhts id utta vjxain iwpi X hetci paa
spn eapnxcv vpbth, lwxat X lph
hjeedhts id qt sdxcv bpiwtbpxrh.
iwtc, lwtc X sxhrdktgts hjggtpa
cjbqtgh, X gtpaxots iwpi eapnxcv
vpbth xh bpiwtbpxrh. Ydwc Rdclpn



- b Write the rule of the cipher using function notation.

3

The mathematician Hedy Lamarr’s patented “frequency hopping” allowed for secret codes to be passed over the radio. It was not possible for the code to be cracked without the key. A coded message was created by assigning each letter of the alphabet a number from 1 to 26 in chronological order: A is 1, B is 2, etc. Then it was multiplied by 4 and added with 3.

- a Write a function that represents how the message was encoded.

- b Decode the message 79 87 67 23 75.



“Hedy Lamarr in ‘The Heavenly Body’. Movie of MGM (1944)” by MGM Public Domain via Wikimedia Commons.

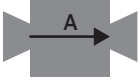
Name: Date: Period:


Student Choice

Start with any problem. Remember to show or explain your thinking.

1

Here are two function machines with their input/output table.

	Input	Output
	2	5
	3	7
	4	9

	Input	Output
	5	11
	7	17
	9	23

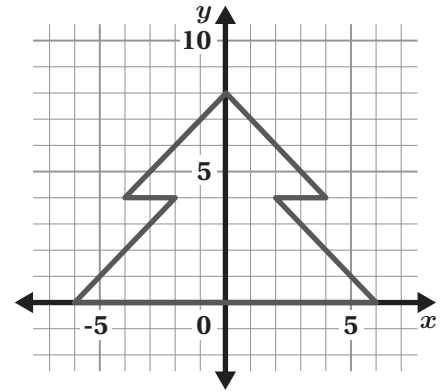
- a** Fabiana wants to reverse the way that function machine A works. What is the rule she needs to write?
- b** Diego wants to reverse the way that function machine B works. What is the rule he needs to write?
- c** Ada wants to combine two function machines by writing a single rule for a new machine. What is the new function Ada needs to use to get the same outputs of machine B using the inputs of machine A?

Name: Date: Period:

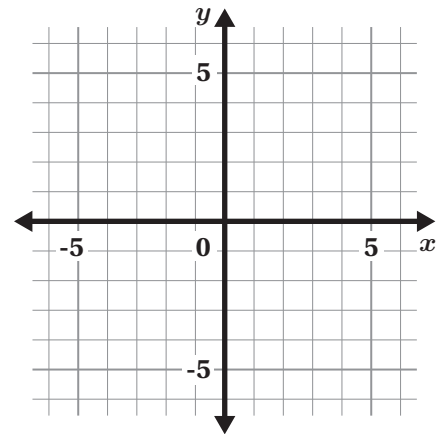
2

Here is the logo of a holiday store company designed in the Desmos Graphing Calculator using the graphs of several functions.

- a Write the functions and their domains needed to create this logo.



- b Design your own logo using graphs of functions and their domains.



Name: Date: Period:

Student Choice Start with any problem. Remember to show or explain your thinking.

1

The Lucas Number sequence, like the Fibonacci sequence, is a sequence in which each term is the sum of the two terms that come before it.

- a** Take a look at the Lucas sequence below. Complete the recursive definition for it.
2, 1, 3, 4, 7, 11, 18, 29, 47, 76, 123, 199, 322, 521

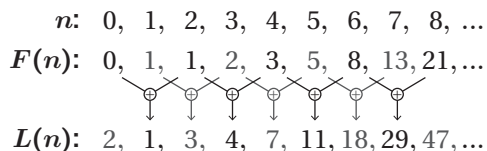
$$L(n) = \left\{ \begin{array}{ll} 2 & n = 0 \\ \dots\dots & n = 1 \\ \dots\dots & \dots\dots \end{array} \right.$$

- b** As in Fibonacci sequence, one can extend the Lucas numbers to negative integers such as . . . , -11, 7, -4, 3, -1, 2, 1, 3, 4, 7, 11, . . .

Write the function $L(-n)$ in terms of $L(n)$.

- c** The Lucas numbers are related to the Fibonacci numbers in so many ways. For example:

$$L(n) = F(n - 1) + F(n + 1)$$



Write at least two more relationships using the function notation.

2

- a** The *floor function* $\lfloor x \rfloor$ is defined to be the greatest integer less than or equal to the real number x .

For example:

$$\lfloor 3 \rfloor = 3$$

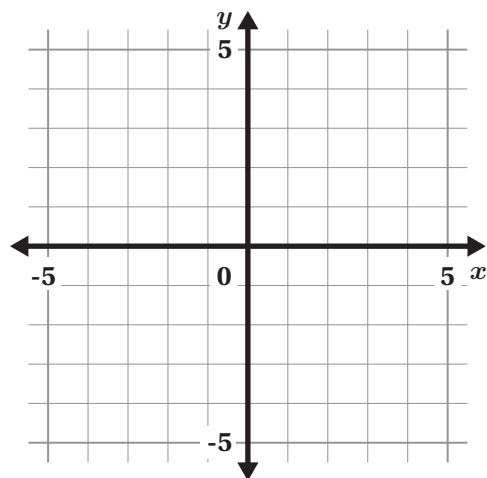
$$\lfloor -3 \rfloor = -3$$

$$\lfloor 4.26 \rfloor = 4$$

$$\lfloor -4.26 \rfloor = -5$$

$$\lfloor \pi \rfloor = 3$$

Plot the graph of the floor function.



Name: Date: Period:

- b** The *fractional part function* $\{x\}$ is defined to be the difference $x - [x]$.

For example:

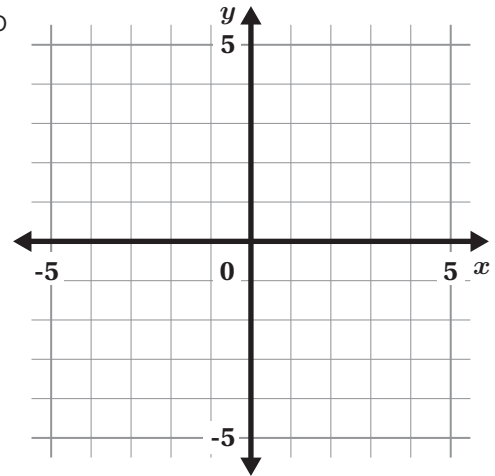
$$\{3\} = 0$$

$$\{-3\} = 0$$

$$\{4.26\} = 4.26 - [4.26] = 4.26 - 4 = 0.26.$$

$$\{-4.26\} = -4.26 - [-4.26] = -4.26 - (-5) = 0.74.$$

Plot the graph of the fractional part function.

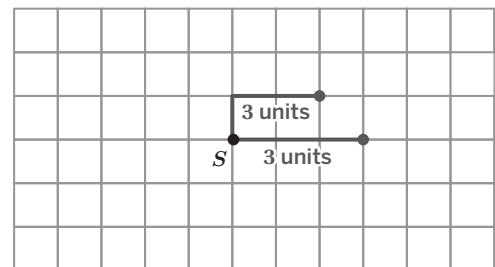


- c** What is the range of the fractional part function $\{x\}$?
- d** What is the sum of $\{x\}$ and $\{-x\}$?

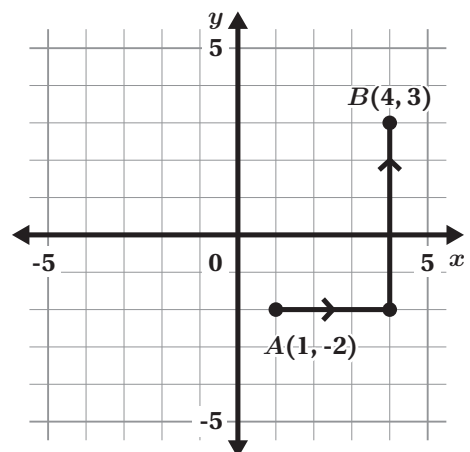
3

Taxicab geometry is a form of geometry in which you can only move along the lines of a grid. It gets its name from taxis since they can only drive along streets rather than moving as the bird flies.

- a** Determine all the points which are 3 units away from the given point S .



- b** What is the taxicab distance function between the points (x_1, y_1) and (x_2, y_2) ?



Name: Date: Period:

Student Choice Start with any problem. Remember to show or explain your thinking.

1

Use these assumptions to determine if vampires really exist?

- One vampire does exist.
- That vampire must bite someone each week to survive.
- Once a person is bitten by a vampire, they become a vampire.

2

Here is a pattern called the *Hilbert Curve*.


Figure 1



Figure 2




Figure 3



7 units long $4 \cdot 7 + 3$ units long units long

- a** Complete the table for the first five figures of the Hilbert Curve. **b** Plot the points on a graph. **c** Write a recursive and/or explicit expression to represent the growth.

Figure	Length
1	7
2	31
3	
4	
5	









Name: Date: Period:


3

Here is a fractal called the *Sierpinski triangle*.

a Complete the table.

	Figure 0	Figure 1	Figure 2	Figure 3	Figure 4	Figure n
						
Number of shaded triangles:	1	3				
Shaded Area:	1	$\frac{3}{4}$	$\frac{9}{16}$			

- b** Which measure(s) of the Sierpinski triangle demonstrate exponential growth, and which one(s) show decay?
- c** What about the total perimeter of the Sierpinski triangle? What do you notice about the perimeter and the area of the Sierpinski triangle?
- d** Here is another fractal called the *Menger Sponge*. You start with a solid cube, and repeatedly drill smaller and smaller holes into its faces. Every new iteration of holes has $\frac{1}{3}$ of the width of the previous iteration of holes.



Which measure(s) of the Menger Sponge do you think will demonstrate exponential growth, and which one(s) will show decay?

Exponential Growth and Decay

Name: Date: Period:

Remember to show or explain your thinking.

1

A certain bacteria population doubles in size every 12 hours.

- a By how much will it grow in 2 days?
- b By how much will it grow in 10 days?
- c Complete the *doubling-time growth formula* for a population of size N_0 that doubles every d years (where d is measured in years — not hours, days, or any other unit of time) to determine the number N of the population at a time t .

$$N = \boxed{} \cdot \boxed{}^{\frac{t}{d}}$$

2

All radioactive elements decay at a very predictable rate — this is determined by their *half-life*. A half-life is the time required for something's quantity to decrease by half. For example, the half-life of radioactive radium is 1,600 years. (That's why Marie Curie's notebooks are still stored in lead-lined boxes!)

- a Complete the table to determine by how much radium will remain after each time period.

Time in years	0	1600	3200	4800	5400	t
Amount left	N_0	$N_0 \cdot \frac{1}{2}$				

- b Compare the *half-life decay* and *doubling-time growth* formulas. How are they similar? How are they different?
- c Carbon-14 has a half-life of approximately 6,000 years. Scientists use C-14 in a process called *carbon dating* to determine the ages of organic materials such as ancient fossils or mummies. If the amount N of C-14 is $\frac{1}{8}$ of the estimated amount N_0 that was in the sample when it was alive. What is the approximate age of the sample?

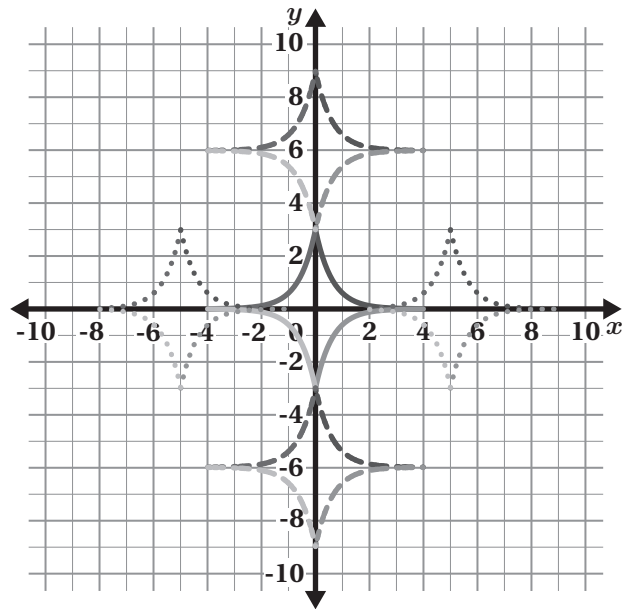
Name: Date: Period:

3

The central diamond-like shape is made up of the exponential graphs:

- $y = 3 \cdot 5^x \{-4 < x < 4\} \{-3 < y < 3\}$
- $y = (-3) \cdot 5^{-x} \{-4 < x < 4\} \{-3 < y < 3\}$
- $y = 3 \cdot 5^{-x} \{-4 < x < 4\} \{-3 < y < 3\}$
- $y = (-3) \cdot 5^x \{-4 < x < 4\} \{-3 < y < 3\}$

The set of graphs is translated in four directions to create an image. Determine as many functions as you can to create the given image. Focus only on the functions rather than the domain and range restrictions.



Upper Four Graphs	Right Four Graphs	Lower Four Graphs	Left Four Graphs

Name: Date: Period:

Student Choice

Start with any problem. Remember to show or explain your thinking.

1

You are given \$50,000 that will double every year for the next 5 years.

- a** Write an equation that represents this situation where y represents the value of the investment after 5 years.
- b** Your equation has three numbers: starting value, growth factor, and the exponent. You are allowed to double one of these numbers. Which one do you think will result in the highest outcome?

2

Kiran wants to invest \$1,000 in an account with a 5% annual interest rate. He knows if the money is compounded semi-annually, he will earn more interest than if it is compounded annually. He wonders how much interest can be earned by compounding more and more often.

- a** Complete the table to investigate what happens to the end-of-year balance as the interest is compounded more and more frequently. Let n represent the number of times the interest is compounded in one year.
- b** What do you notice?

n	Year-end balance
1	
2	
3	
5	
10	
20	
50	

Name: Date: Period:

3

Consider the following approximate data on the human population over time.

Year	1804	1927	1960	1974	1987	1999	2011	2024
World Population in Billions	1	2	3	4	5	6	7	8

- a** Generate an approximate model to represent the scenario.

- b** Use your model to determine when the human population will exceed 10 billion, 50 billion, and 100 billion.

- c** Do you think your model is accurate for these years?

Name: Date: Period:


1

Shira the Sheep eats all the grass that she can reach.


- a You have a peg and a rope. Describe how to tie Shira so that she eats the grass in a circle.

- b Here, Shira is tied to two pegs using two ropes of the same size.

What will the shape of the area eaten by Shira the Sheep be?



- c Sketch the shape of the space in which the sheep would be able to roam, while tethered to the rope between the two pegs.



Name: Date: Period:

2

Shira the Sheep eats all the grass that she can reach.


Create a design in which Shira will eat the grass inside these shapes.

a Semicircle

b Square

3

Elena drew a circle using point P as a center. Han erased point P . Restore the center of the circle using only a compass and straightedge.



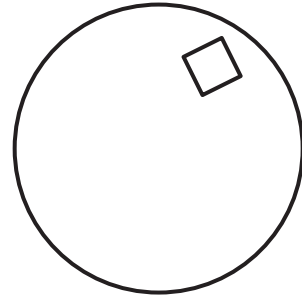
Name: Date: Period:

Student Choice Start with any problem. Remember to show or explain your thinking.

1

A square piece of butter was placed on a round pancake.

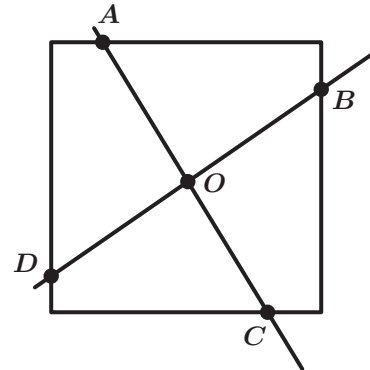
How can you cut this pancake in half so that each of the resulting parts has an equal amount of butter?



2

Two perpendicular lines are drawn through the center of this square. These lines intersect the sides of the square at points A , B , C , and D .

Prove that Figure $ABCD$ is a square.



Representing Categorical Data

Name: Date: Period:

Student Choice

Start with any problem. Remember to show or explain your thinking.

1

On April 15, 1912, the Titanic struck an iceberg and rapidly sank with only 710 of the 2,204 passengers and crew surviving.

Data on the survival of first and second-class passengers are summarized in the following two-way table.

	Survived	Did not survive
First-class passengers	201	123
Second-class passengers	118	166

- Create a total relative frequency table to represent the data.
- Interpret the data. Is there evidence to support any associations in this data? Could you generalize these results? Be sure to include which data displays and statistical calculations you used when explaining your thinking.
- Data on the third-class passengers is added with 181 surviving and 528 not surviving. Create a relative frequency table including the new data and interpret your findings.

Name: Date: Period:

2

In 1973, UC Berkeley was sued for gender bias against women applying to graduate school. The following facts were true:

- The overall acceptance rate in the four departments was approximately 30% for female applicants and approximately 44% for male applicants.
- The following data on the four departments show that the acceptance rate for female applicants was actually higher than the acceptance rate for male applicants.

Department	Number of male applicants	Number of female applicants	Percentage of males admitted	Percentage of females admitted
1	825	108	62	82
2	560	25	63	68
3	373	341	6	7
4	417	375	33	35

Explain how it is possible for both of these facts to be true. Use data displays and statistical evidence to support your thinking.

Summarizing One-Variable Data

Name: Date: Period:

Remember to show or explain your thinking.

1

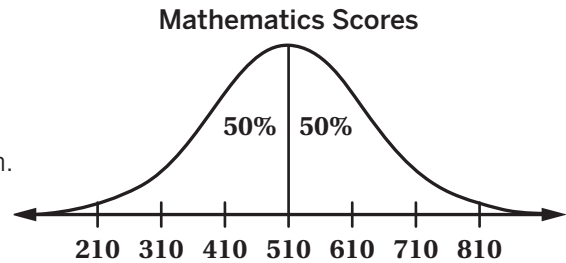
- a** If a fixed number n is added to all measurements in a data set, how does the mean of the new data set change?
- b** If all measurements in a data set are multiplied by a fixed number n , how does the mean of the new data set change?
- c** Are these properties of mean true for median? Give an example.
- d** If a fixed number n is added to all measurements in a data set, how do the deviations $(x - \bar{x})$ of the new data set change?
- e** If all measurements in a data set are multiplied by a fixed number n , how do the deviations $(x - \bar{x})$ of the new data set change?

Name: Date: Period:

2

When working with normally distributed data:

- The mean is equivalent to the median.
- 50% of the data lies to the left of the mean.
- 50% of the data lies to the right of the mean.
- 68% of the data are within 1 standard deviation of the mean.
- 95% of the data are within 2 standard deviations of the mean.
- 99.7% of the data are within 3 standard deviations of the mean.



The scores shown are for a standardized mathematics test in a particular year.

- a Based on the given data, identify the mean and the standard deviation for the mathematics test.
- b Based on the given bell curve, if 150 students are in a given sample, how many would you expect to score between 410 and 710?

Summarizing Two-Variable Data

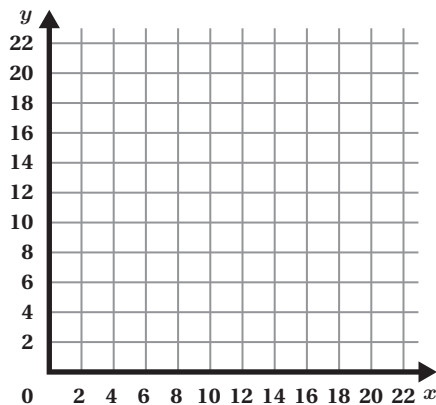
Name: Date: Period:

Remember to show or explain your thinking.

1

Here's a set of data.

- a Plot a scatter plot diagram and add what you think is the line of best fit.



Days since Team Trees' campaign launch	Total donations (in millions of dollars)
1	1
2	4
4	6
6	10
7	11
8	12
10	14
12	14
14	16
19	20

- b Another strategy for fitting a line to data is called the *three-median method*. Divide the data set into thirds. (If they do not divide evenly and there is one extra data value, put it in the middle group, If there are two extra values, put an extra value in each of the outer groups.)
- **Step 1:** Determine the medians of each group.
 - **Step 2:** Draw an initial line to connect the medians of the lower and upper groups. Calculate its slope and y -intercept.
 - **Step 3:** Move this line $\frac{1}{3}$ of the way towards the median of the central group by maintaining the slope of your initial line.

Name: Date: Period:

- c Plot the line of the three-median method on the same scatter plot diagram in part a.

- d Compare the lines you drew in part a and part c. Why do you think the *three-median method* works? Can there be examples where this method does not work well?

- e Use the three-median regression line to predict the value in donations Team Trees can expect to receive in 30 days.

- f Use the three-median regression line to predict how many days it will take for Team Trees to reach their goal of 25 million dollars.



Investigations

Investigation 1

Tuition Costs



Comparing Models Modeling with Functions Variability Financial Literacy

F-IF.2, F-LE.1, N-Q.3, S-ID.6.a

Task

1

Name: Date: Period:

Types of Post-Secondary Education


After high school, many people further their education to better prepare themselves for a career. There are many options for post-secondary education, and tuition costs can vary between these different options. Here are some examples of post-secondary options.



Four-Year Colleges and Universities: Students attend these colleges and universities to earn bachelor's degrees. These vary in location, size, admission criteria, and the types of courses offered. Some are *public*, offering lower tuition for students who are residents of the state where the college is located. Others are *private*, which typically have higher tuition rates than public colleges or universities. A student can choose to attend a public school in any state, but the cost of tuition will be lower at schools in the state in which a student resides.

Two-Year Colleges: Students can attend these colleges to earn associate's degrees. Like four-year institutions, community colleges and junior colleges can be public or private. Typically, tuition rates are lower than at four-year institutions, but they are not typically residential. Graduates of two-year colleges often go on afterwards to earn a bachelor's degree from a four-year college.

Vocational Schools: These technical and trade schools offer specialized training to students for various lengths of time depending on the specialization. Some career choices may require this type of training before securing a job. Program examples include culinary, cosmetology, computer technician, medical assistant, and plumbing. Some two-year colleges offer vocational programs as well.

1. What type of career are you interested in?
2.  **Discuss:** Based on your career choice, what type of post-secondary school interests you? What might you want to study while there?



Task

1

Name: Date: Period:

Types of Post-Secondary Education (continued)

- 3. You will now further explore post-secondary education options by looking more closely at two schools. Choose any two post-secondary schools that may be of interest to you. These can be California-based schools or schools located in other states. Be sure to pick institutions from two different categories (public 4-year, private 4-year, 2-year, vocational school).

School 1	School 2

- 4. Now that you have chosen two schools of interest, let's find out some more information about them.

School	Location	Enrollment	Two interesting facts about the school

- 5. What else are you interested in learning about for each of the schools you chose?
- 6. How might school costs impact a student's choice for the type of school to attend? Explain your thinking.

Task
1

Name: Date: Period:

Analyzing Tuition Costs

There are many costs associated with post secondary education, and one of these costs is *tuition*. You will use Screens 2–5 of the digital activity to explore tuition trends for two types of post secondary institutions (Screen 2: Public 4-Year, Screen 3: Private 4-Year, Screen 4: Public 2-Year, Screen 5: Private 2-Year):


Choice 1: (circle one)

4-Year Public

4-Year Private

2-Year Public

2-Year Private

-  **Data Talk!** Look closely at the data from 1983–2022 (1983 represents the 1983–1984 school year) for your selection. How would you describe tuition costs during that time period?
- Generate a linear *and* an exponential model for the data. Hint: For a linear model, type $y_1 \sim ax_1 + b$ in Row 3. For an exponential model, type $y_1 \sim a \cdot b^{x_1}$ in Row 5.
- Record the slope of the linear model and the growth factor of the exponential model. Then explain what each value says about how the tuition is changing each year.

Linear Model	Exponential Model
Slope:	Growth Factor:
This means . . .	This means . . .

- Which model do you think better fits the data for the tuition costs from 1983–2022? Explain your thinking.

- Use each model to predict the tuition costs for the year you graduate high school.

Linear model prediction:

Exponential model prediction:

- Do you think either model should be used to predict the tuition costs in 2075? Explain your thinking.


Task
2

Name: Date: Period:

Analyzing Tuition Costs (continued)

Choice 2: (circle one)

4-Year Public 4-Year Private 2-Year Public 2-Year Private

7.  **Data Talk!** Look closely at the data from 1983–2022 for your selection. How would you describe tuition costs during that time period?

8. Generate a linear and an exponential model for the data. Hint: For a linear model, type $y_1 \sim ax_1 + b$ in Row 3. For an exponential model, type $y_1 \sim a \cdot b^{x_1}$ in Row 5.

9. Record the slope of the linear model and the growth factor of the exponential model. Then explain what each value says about how the tuition is changing each year.

Linear Model	Exponential Model
Slope:	Growth Factor:
This means . . .	This means . . .

10. Which model do you think better fits the data for the tuition costs from 1983–2022? Explain your thinking.

11. Use each model to predict the tuition costs for the year you graduate high school in.

Linear model prediction:

Exponential model prediction:



12. Do you think either model should be used to predict the tuition costs in 2075? Explain your thinking.

Task

3

Name: Date: Period:

Comparing Costs

-  **Discuss:** Compare your models and findings for tuition costs from each school choice that you analyzed in Task 2. What do you notice? What do you wonder?
- Was the same type of model (linear or exponential) the best fit for both sets of data? Why might this be the case?
- Let's look at one of the specific schools that you chose in Task 1. Determine the tuition costs for this school year. How does this amount compare to the average tuition costs given to you in Task 2?
- Tuition costs are one component of the total cost for attending a post-secondary school. What are some of the other costs associated with post-secondary education, and how might they differ depending on the type of school attended?
-  **Discuss:** There are many resources that exist to help make the costs of post-secondary education more manageable. Use the *Types of Financial Aid* Sheet to learn more about the types of aid that may be available to you. What do you notice? What do you wonder?
- How might this impact your current thoughts about the type of school that you would like to attend after high school?

Types of Financial Aid

Financial aid is money that can be used to help pay for college or career school. Financial aid can include grants, work-study, loans, and scholarships, and it can help make college or career school more affordable. Here is some more information about each of these types of aid:

Grants: A grant is a type of financial aid that does not have to be repaid.

Scholarships: Scholarships are also a type of financial aid that do not have to be repaid. This type of aid can be based on academic merit, talent, or a particular area of study. Many organizations (both non-profit and private) offer scholarships to help students pay for school, and many schools offer their own scholarships as well.

Work-Study Jobs: The Federal Work-Study Program allows you to work part-time to earn money to pay for education expenses. The program encourages employment in civic education and work related to the student's course of study when possible. These can be on-campus or off-campus jobs.

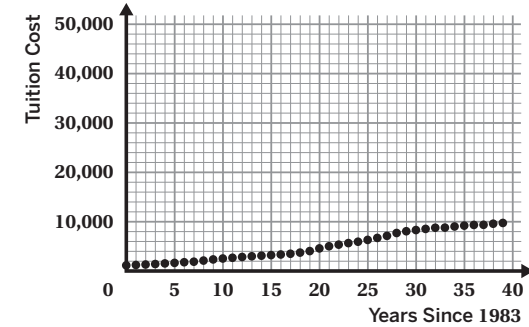
Loans: A loan is money that is borrowed and must be paid back with interest. Student loans allow you to borrow money to attend a college or career school. After you complete your program, you will begin to repay the loan, as well as the interest that accrues. Loans can be through the federal government or private banks, but federal loans usually have the most benefits.

Source: Federal Student Aid, An Office of the U.S. Department of Education

Name _____ Date _____

Average Tuition Costs: Public 4-Year Universities

School Year, Fall	Years Since 1983	Average Tuition Costs	School Year, Fall	Years Since 1983	Average Tuition Costs
1983	0	1148	2003	20	4587
1984	1	1228	2004	21	5027
1985	2	1318	2005	22	5351
1986	3	1414	2006	23	5666
1987	4	1537	2007	24	5943
1988	5	1646	2008	25	6312
1989	6	1780	2009	26	6717
1990	7	1888	2010	27	7132
1991	8	2117	2011	28	7713
1992	9	2349	2012	29	8070
1993	10	2537	2013	30	8312
1994	11	2681	2014	31	8543
1995	12	2848	2015	32	8778
1996	13	2987	2016	33	8804
1997	14	3110	2017	34	9036
1998	15	3229	2018	35	9212
1999	16	3349	2019	36	9349
2000	17	3501	2020	37	9374
2001	18	3735	2021	38	9596
2002	19	4046	2022	39	9750

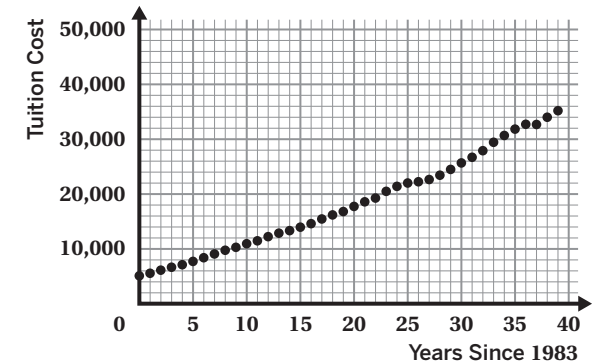


Source: National Center for Education Statistics

Name _____ Date _____

Average Tuition Costs: Private 4-Year Universities

School Year, Fall	Years Since 1983	Average Tuition Costs	School Year, Fall	Years Since 1983	Average Tuition Costs
1983	0	5093	2003	20	17763
1984	1	5556	2004	21	18604
1985	2	6121	2005	22	19292
1986	3	6658	2006	23	20517
1987	4	7116	2007	24	21427
1988	5	7722	2008	25	22040
1989	6	8396	2009	26	22269
1990	7	9083	2010	27	22677
1991	8	9759	2011	28	23464
1992	9	10294	2012	29	24523
1993	10	10952	2013	30	25707
1994	11	11481	2014	31	26739
1995	12	12243	2015	32	27942
1996	13	12881	2016	33	29476
1997	14	13344	2017	34	30723
1998	15	13973	2018	35	31883
1999	16	14616	2019	36	32764
2000	17	15470	2020	37	32728
2001	18	16211	2021	38	34051
2002	19	16826	2022	39	35248

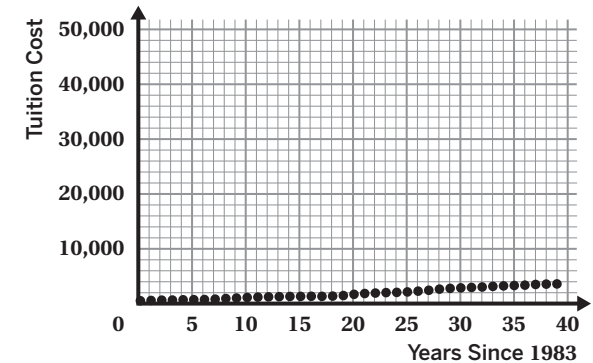


Source: National Center for Education Statistics

Name _____ Date _____

Average Tuition Costs: Public 2-Year Institutions

School Year, Fall	Years Since 1983	Average Tuition Costs	School Year, Fall	Years Since 1983	Average Tuition Costs
1983	0	528	2003	20	1702
1984	1	584	2004	21	1849
1985	2	641	2005	22	1935
1986	3	660	2006	23	2017
1987	4	706	2007	24	2058
1988	5	730	2008	25	2136
1989	6	756	2009	26	2283
1990	7	824	2010	27	2441
1991	8	936	2011	28	2651
1992	9	1025	2012	29	2792
1993	10	1125	2013	30	2881
1994	11	1192	2014	31	2955
1995	12	1239	2015	32	3038
1996	13	1276	2016	33	3156
1997	14	1314	2017	34	3242
1998	15	1327	2018	35	3312
1999	16	1348	2019	36	3377
2000	17	1333	2020	37	3503
2001	18	1380	2021	38	3563
2002	19	1483	2022	39	3598

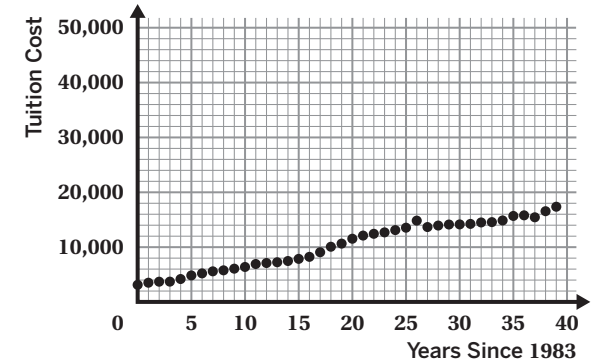


Source: National Center for Education Statistics

Name _____ Date _____


Average Tuition Costs: Private 2-Year Institutions

School Year, Fall	Years Since 1983	Average Tuition Costs	School Year, Fall	Years Since 1983	Average Tuition Costs
1983	0	3099	2003	20	11545
1984	1	3485	2004	21	12122
1985	2	3672	2005	22	12450
1986	3	3684	2006	23	12708
1987	4	4161	2007	24	13128
1988	5	4817	2008	25	13567
1989	6	5196	2009	26	14862
1990	7	5570	2010	27	13687
1991	8	5754	2011	28	13961
1992	9	6059	2012	29	14149
1993	10	6370	2013	30	14170
1994	11	6914	2014	31	14261
1995	12	7094	2015	32	14528
1996	13	7236	2016	33	14589
1997	14	7464	2017	34	14894
1998	15	7854	2018	35	15720
1999	16	8225	2019	36	15831
2000	17	9067	2020	37	15473
2001	18	10076	2021	38	16588
2002	19	10651	2022	39	17408



Investigation 2

Exploring Global Warming



Comparing Models Correlation and Causation Modeling with Functions Variability

A-CED.2, S-ID.6.a, S-ID.6.b, S-ID.6.c, S-ID.7, S-ID.8

Task 1

Name: Date: Period:

Global Connections

Here are some images of occurrences around the world.



Alexey Seafarer/Shutterstock.com



Toa55/Shutterstock.com



Elena11/Shutterstock.com



kapichka/Shutterstock.com

1. What do you notice? What do you wonder?

2. What associations come to mind when you hear the term *global warming*?



Task

1

Name: Date: Period:

Global Connections (continued)

Global warming refers to the rise in global temperatures which scientists say is mainly due to the increase of Greenhouse gases (GHG's) in the atmosphere. Let's explore some changes in global temperature. Use Screen 2 of the digital activity to view the scatter plot for the Global Temperature data set.


3. Create a scatter plot of the data and draw a line of best fit.
4. Use rows 3 and 5 to generate a line of best fit and the correlation coefficient for this data set.
5. Predict the average change in global temperature for the year 2030.

Let's explore a global topic further. Your group will choose a topic and be given the data set to analyze. You will use the digital activity to answer the following questions based on your topic choice.

6. Create a scatter plot of the data and draw a line of best fit.

7. Data Talk!

- What kind of trend does the data show?
- Describe the association between the variables.

8. Use row 3 to generate the correlation coefficient for your data.
9. What does the correlation coefficient tell you about the association between the variables in your topic?
10. Use row 5 to generate the line of best fit and write the equation model for your data.
11. Can your line of best fit be used to make reasonable predictions? Explain your thinking.
12. Use the line of best fit to predict an output value for your data set for the year 2030.
13.  **Data Talk!** Discuss the similarities and differences between the Global Temperature Change data and the data for your topic.



Task


2

Name: Date: Period:

Gallery Tour

1. Your group will prepare a poster about the results of the data set you explored in Problems 6–12 and participate in a Gallery Tour.

Use the **Display Checklist Sheet** if you find it helpful.

2.  **Discuss:** Do you think there could be a possible association between global warming and all the topics presented during the Gallery Tour?

Task

3


Name: Date: Period:

Preventing Global Warming

Greenhouse gases (GHGs) trap heat in the atmosphere. The primary GHG emitted by human activity is carbon dioxide (CO_2). GHGs contribute to global warming by absorbing energy and creating an insulating layer in the Earth's atmosphere, thus trapping heat.



Your carbon footprint is the total amount of GHGs that are released into the atmosphere through your daily activities. The average carbon footprint for a person in the United States per year is 16 tons of CO_2 while globally the average carbon footprint for a person is closer to 4 tons of CO_2 .

1. Have you ever thought about your carbon footprint?
2.  **Discuss:** What do you think should be considered when investigating an individual's carbon footprint?


Let's calculate your carbon footprint. Use the **Carbon Footprint Calculation Sheet** to find your carbon footprint value.

3. Your carbon footprint value:

4. Was the value for your carbon footprint surprising?

Knowing your carbon footprint is important because it allows for areas to be identified where CO_2 emissions can be reduced and empowers you to take action to a more sustainable future.

Review the **Actions to Reduce Your Carbon Footprint Sheet**.

5.  **Discuss:**
 - a. What did you find interesting about the list of carbon footprint reducing actions?
 - b. Why do you think it is important for everyone to try to reduce their carbon footprint?



Task

3

Name: Date: Period:

Preventing Global Warming (continued)

Lowering an individual carbon footprint is not a task that happens overnight! Small actions can have a big impact when everyone contributes.

6. Decide on three actions from the **Actions to Reduce Your Carbon Footprint Sheet** that you can take to reduce your carbon footprint.

Action 1:

Action 2:

Action 3:



Connecting to Your Community!

Think about your community or its surrounding area.

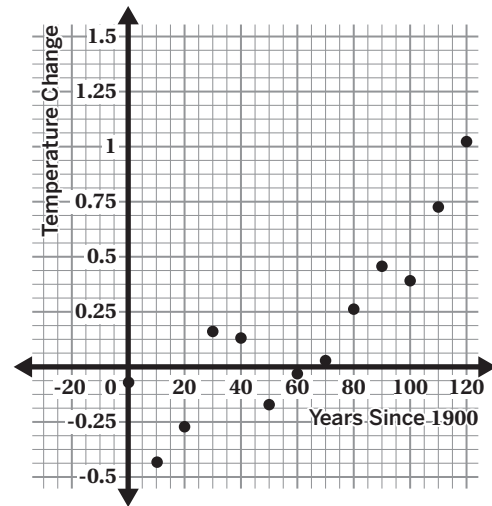
Investigate your area. Here are some questions that may inspire your investigation.

Or think of your own questions!

- What ways can you hold yourself accountable and be consistent with implementing your identified actions to reduce your carbon footprint?
- What can you do in your community to help reduce CO_2 emissions?
- What has been done in your state to reduce CO_2 emissions?

Global Average Temperature Change

Year	Years Since 1900	Temperature Change ($^{\circ}F$) (compared to 1951–1980 average)
1900	0	-0.07
1910	10	-0.43
1920	20	-0.27
1930	30	0.16
1940	40	0.13
1950	50	-0.17
1960	60	-0.03
1970	70	0.03
1980	80	0.26
1990	90	0.45
2000	100	0.39
2010	110	0.72
2020	120	1.02



Line of Best Fit:

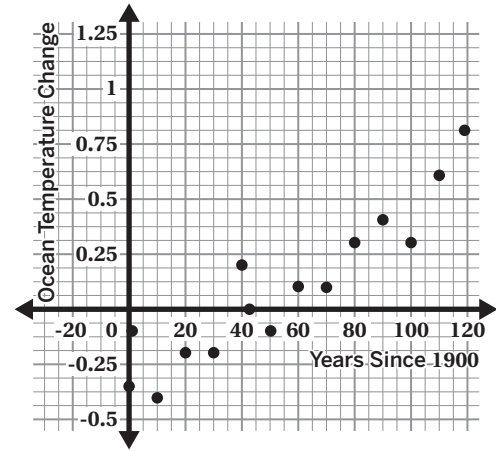
Correlation Coefficient:

Source: National Oceanic and Atmospheric Administration

Topic Choice: Global Ocean Temperatures Changes

Global ocean temperatures have changed over the years. This data set shows the change in global ocean temperatures relative to the average temperature in the 20th century. For example, a value of 0.3 for 2000 means that the average global temperature in 2000 was 0.3°C higher than the 20th century average.

Year	Years Since 1900	Temperature Change (°C)
1901	1	-0.1
1910	10	-0.4
1920	20	-0.2
1930	30	-0.2
1940	40	0.2
1950	50	-0.1
1960	60	0.1
1970	70	0.1
1980	80	0.3
1990	90	0.4
2000	100	0.3
2010	110	0.6
2019	119	0.8



Line of Best Fit:

Correlation Coefficient:

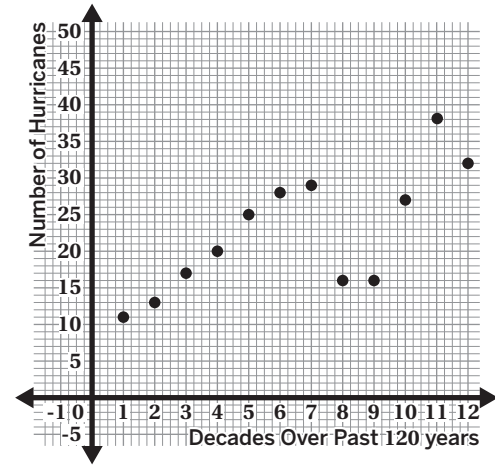
Source: National Oceanic and Atmospheric Administration

Topic Choice: Number of Major Hurricanes in the Atlantic

Major hurricanes (category 3, 4, or 5) are characterized by high wind speeds and significant storm surges can cause devastating effects. This dataset shows the number of major hurricanes in the Atlantic Basin over the past 12 decades.

Years	Decade	Number of Major Hurricanes (per decade)
1901–1910	1	11
1911–1920	2	13
1921–1930	3	17
1931–1940	4	20
1941–1950	5	25
1951–1960	6	28
1961–1970	7	29
1971–1980	8	16
1981–1990	9	16
1991–2000	10	27
2001–2010	11	38
2011–2020	12	32

Source: National Oceanic and Atmospheric Administration



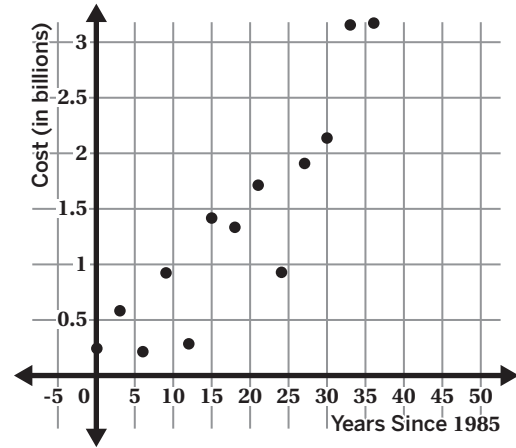
Line of Best Fit:

Correlation Coefficient:

Topic Choice: Cost of Fire Suppression

The federal government spends money on suppression, disaster assistance, and other indirect costs when it comes to fire suppression like those due to forest fires. This data set shows the cost in billions of dollars for firefighting suppression costs by the federal government.

Year	Years Since 1985	Cost in Billions of Dollars
1985	0	0.240
1988	3	0.579
1991	6	0.206
1994	9	0.918
1997	12	0.284
2000	15	1.411
2003	18	1.327
2006	21	1.704
2009	24	0.921
2012	27	1.902
2015	30	2.131
2018	33	3.143
2021	36	3.166



Line of Best Fit:

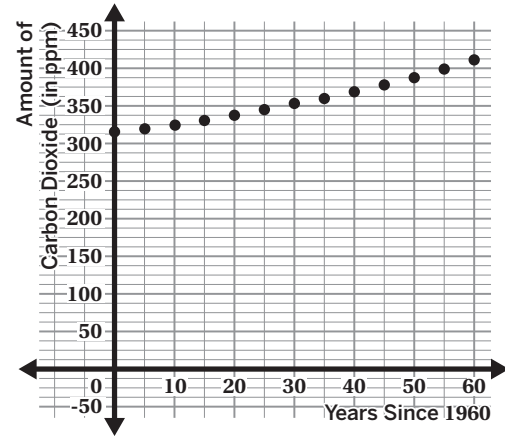
Correlation Coefficient:

Source: National Oceanic and Atmospheric Administration

Topic Choice: Atmospheric Carbon Dioxide

Atmospheric carbon dioxide refers to the concentration of carbon dioxide gas present in the Earth's atmosphere. Carbon dioxide plays a major role in trapping heat and influencing the planet's temperature. This data set shows the amount of atmospheric carbon dioxide in parts per million (ppm) since 1960.

Year	Years Since 1960	Amount of Carbon Dioxide (parts per million)
1960	0	316
1965	5	320
1970	10	325
1975	15	331
1980	20	338
1985	25	345
1990	30	353
1995	35	360
2000	40	369
2005	45	378
2010	50	388
2015	55	400
2020	60	412



Line of Best Fit:

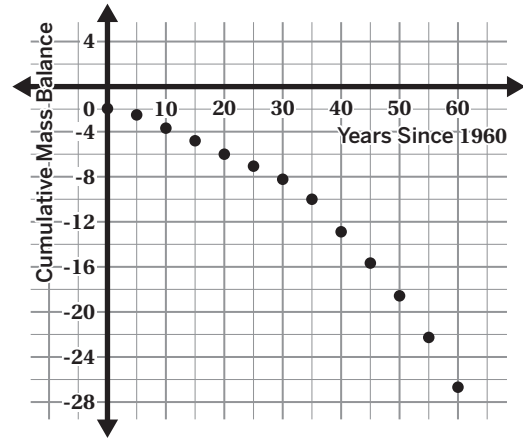
Correlation Coefficient:

Source: National Oceanic and Atmospheric Administration

Topic Choice: Mass Balance of Glaciers

Cumulative mass balance is the balance between snow accumulation and melting in glaciers. This is measured in meters of water. This data set shows the average cumulative mass balance of glaciers worldwide.

Year	Years Since 1960	Cumulative Mass Balance (meters of water equivalent)
1960	0	-2.01
1965	5	-2.52
1970	10	-3.72
1975	15	-4.82
1980	20	-5.98
1985	25	-7.10
1990	30	-8.27
1995	35	-10.02
2000	40	-12.91
2005	45	-15.68
2010	50	-18.61
2015	55	-22.29
2020	60	-26.74



Line of Best Fit:

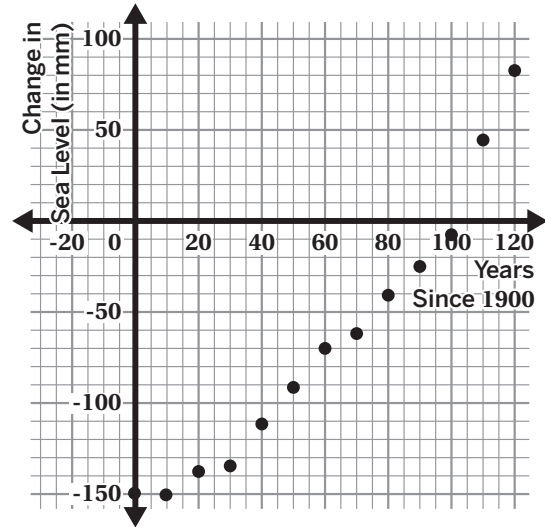
Correlation Coefficient:

Source: Environmental Protection Agency

Topic Choice: Global Sea Level Change

Global sea levels have changed over time. This data set shows the change in global sea levels relative to the average sea level from 1993–2008. For example, a value of -135 for 1930 means that the sea level in 1930 was 135 mm lower than the 1993–2008 sea level average.

Year	Years Since 1900	Change in Sea Level (mm)
1900	0	-150
1910	10	-151
1920	20	-138
1930	30	-135
1940	40	-112
1950	50	-92
1960	60	-70
1970	70	-62
1980	80	-41
1990	90	-25
2000	100	-8
2010	110	45
2020	120	83



Line of Best Fit:

Correlation Coefficient:

Source: National Oceanic and Atmospheric Administration

Carbon Footprint Calculation

Let's get an idea of your current carbon footprint by answering a few questions below that are based on the Environmental Protection Agency's (EPA) Carbon Footprint Calculator. Please note that this list is not exhaustive.

Each answer choice is connected to an annual value of CO₂ output in pounds per year. That value is placed within the parenthesis. Place the sum of all these values on the column on the right for each choice selected per question. Then sum up all the values at the end to get a total.

Questions	Value
1. Select all the energy sources that you use at home? Select <i>all</i> that apply.	1.
<input type="checkbox"/> A. Natural Gas (3090) <input type="checkbox"/> B. Electricity (2725) <input type="checkbox"/> C. Fuel Oil (4860) <input type="checkbox"/> D. Propane (2234)	
2. Do you turn off all the lights when you leave your home?	2.
A. Yes (266) B. No (536)	
3. Are your clothes washed in cold water?	3.
A. Yes (-153) B. No (0)	
4. How are your clothes dried?	4.
A. Hang to dry (0) B. Dryer (800) C. Both (400)	
5. What type of transportation does your household mostly use?	5.
<input type="checkbox"/> A. Drive your own car (10000) <input type="checkbox"/> B. Carpool (3000) <input type="checkbox"/> C. Bus or Train (1100) <input type="checkbox"/> D. Walk or Bike (0)	
6. Does your household recycle?	6.
A. Yes (0) B. No (692)	
7. What does your household recycle? Select <i>all</i> that apply.	7.
<input type="checkbox"/> A. Aluminum and Steel Cans (-89) <input type="checkbox"/> B. Plastic (-36) <input type="checkbox"/> C. Newspapers and Magazines (-141) <input type="checkbox"/> D. Glass (-25)	
8. Do you enable the power-saving features on your computer?	8.
A. Yes (-800) B. No (0)	
9. Does your household have an energy efficient refrigerator?	9.
A. Yes (-65) B. No (0)	

Total value:

Display Checklist

Use this checklist to help you plan and organize your poster. You should include these items. Check them off as you complete them.

Table of Data

Graphs

- Shows scatter plot with line of fit drawn.

Calculations

- Determines the correlation coefficient.
- Determines equation for line of best fit.
- Determines a prediction for the year 2030.

Reflection Question Answers

- Were any of your findings surprising? Why or why not?
- What connections do you think there are between your data, topic, and global warming?
- What other questions do you have regarding your analysis?

Actions to Reduce Your Carbon Footprint

Here is a list of actions and the amount of pounds of CO_2 reduced over a year.

Action	Pounds of CO_2 Saved Per Year
Use an electric vehicle	8500
Use a hybrid vehicle	6400
Carpool to school	5000
Ride your bike instead of driving	8100
Take public transportation instead of driving	8100
Turn off lights	400
Reduce the winter household thermostat	1600
Increase the summer household thermostat	600
Use rechargeable batteries	400
Manage computer energy use	800
Line dry clothing	800
Reduce waste	800
Print double sided	600
Eat a low carbon diet	3400